

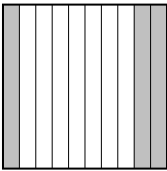





Classer les grilles, en fonction des zones colorées, de la plus petite à la plus grande.

**Réponses**

Ex) A  B  C  D 

Small 0,08 - A  
0,34 - B  
0.3 - C  
Large 0.5 - D

Ex. A,B,C,D

1. \_\_\_\_\_

2. \_\_\_\_\_

3. \_\_\_\_\_

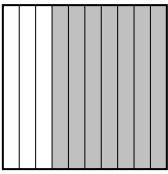


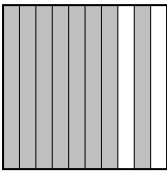
4. \_\_\_\_\_

5. \_\_\_\_\_


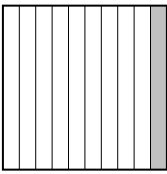


6. \_\_\_\_\_

7. \_\_\_\_\_

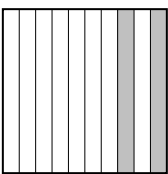



8. \_\_\_\_\_

1) A  B  C  D 





Small \_\_\_\_\_  
Large \_\_\_\_\_

2) A  B  C  D 

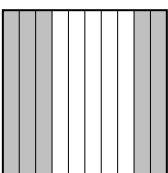
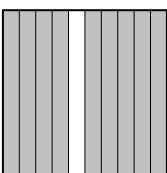


Small \_\_\_\_\_  
Large \_\_\_\_\_

3) A  B  C  D 

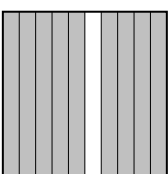



Small \_\_\_\_\_  
Large \_\_\_\_\_

4) A  B  C  D 





Small \_\_\_\_\_  
Large \_\_\_\_\_

5) A  B  C  D 




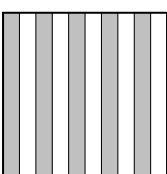
Small \_\_\_\_\_  
Large \_\_\_\_\_

6) A  B  C  D 

Small \_\_\_\_\_  
Large \_\_\_\_\_

7) A  B  C  D 

Small \_\_\_\_\_  
Large \_\_\_\_\_

8) A  B  C  D 

Small \_\_\_\_\_  
Large \_\_\_\_\_



Classer les grilles, en fonction des zones colorées, de la plus petite à la plus grande.

Ex)	A	B	C	D	Small $\frac{0,08 - A}{0,34 - B}$ $\frac{0,3 - C}{0,5 - D}$
					Large
1)	A	B	C	D	Small $\frac{0,68 - B}{0,76 - C}$ $\frac{0,7 - A}{0,8 - D}$
					Large
2)	A	B	C	D	Small $\frac{0,06 - A}{0,12 - C}$ $\frac{0,33 - D}{0,1 - B}$
					Large
3)	A	B	C	D	Small $\frac{0,56 - C}{0,83 - D}$ $\frac{0,2 - A}{0,5 - B}$
					Large
4)	A	B	C	D	Small $\frac{0,76 - D}{0,88 - C}$ $\frac{0,6 - A}{0,7 - B}$
					Large
5)	A	B	C	D	Small $\frac{0,04 - D}{0,37 - C}$ $\frac{0,5 - A}{0,9 - B}$
					Large
6)	A	B	C	D	Small $\frac{0,07 - D}{0,76 - B}$ $\frac{0,8 - C}{0,9 - A}$
					Large
7)	A	B	C	D	Small $\frac{0,35 - B}{0,74 - D}$ $\frac{0,4 - A}{0,5 - C}$
					Large
8)	A	B	C	D	Small $\frac{0,13 - C}{0,35 - B}$ $\frac{0,1 - A}{0,5 - D}$
					Large

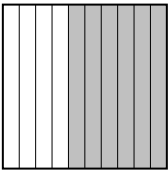



**Réponses**

- Ex. A,B,C,D
1. B,C,A,D
2. A,C,D,B
3. C,D,A,B
4. D,C,A,B
5. D,C,A,B
6. D,B,C,A
7. B,D,A,C
8. C,B,A,D


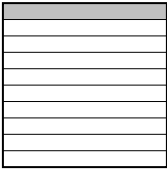




Classer les grilles, en fonction des zones colorées, de la plus petite à la plus grande.

**Réponses**

Ex) A  B  C  D  Small 0.03 - C  
0.4 - D  
0.45 - B  
Large 0.6 - A

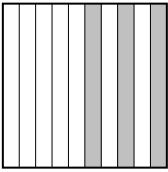


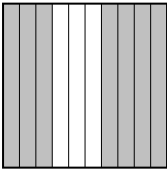
Ex. C,D,B,A

1) A  B  C  D  Small \_\_\_\_\_  
Large \_\_\_\_\_

1. \_\_\_\_\_





2. \_\_\_\_\_

3. \_\_\_\_\_

2) A  B  C  D  Small \_\_\_\_\_  
Large \_\_\_\_\_





4. \_\_\_\_\_

5. \_\_\_\_\_




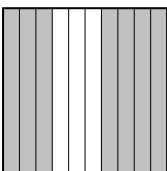
3) A  B  C  D  Small \_\_\_\_\_  
Large \_\_\_\_\_

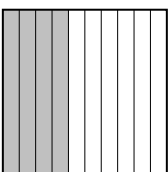



6. \_\_\_\_\_

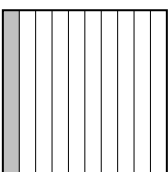
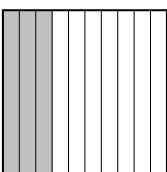
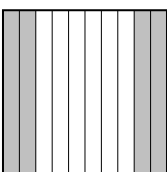

7. \_\_\_\_\_


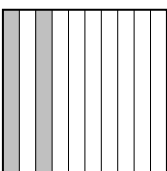


4) A  B  C  D  Small \_\_\_\_\_  
Large \_\_\_\_\_

8. \_\_\_\_\_

5) A  B  C  D  Small \_\_\_\_\_  
Large \_\_\_\_\_

6) A  B  C  D  Small \_\_\_\_\_  
Large \_\_\_\_\_

7) A  B  C  D  Small \_\_\_\_\_  
Large \_\_\_\_\_

8) A  B  C  D  Small \_\_\_\_\_  
Large \_\_\_\_\_



Classer les grilles, en fonction des zones colorées, de la plus petite à la plus grande.





Ex) A		B		C		D		Small	$\frac{0.03 - C}{0.4 - D}$
								Large	$\frac{0.45 - B}{0.6 - A}$
1) A		B		C		D		Small	$\frac{0.1 - B}{0.25 - D}$
								Large	$\frac{0.5 - A}{0.6 - C}$
2) A		B		C		D		Small	$\frac{0.08 - C}{0.3 - A}$
								Large	$\frac{0.7 - D}{0.9 - B}$
3) A		B		C		D		Small	$\frac{0.01 - A}{0.5 - B}$
								Large	$\frac{0.90 - D}{0.92 - C}$
4) A		B		C		D		Small	$\frac{0.2 - C}{0.5 - D}$
								Large	$\frac{0.85 - B}{0.9 - A}$
5) A		B		C		D		Small	$\frac{0.02 - A}{0.23 - B}$
								Large	$\frac{0.5 - C}{0.7 - D}$
6) A		B		C		D		Small	$\frac{0.17 - D}{0.4 - A}$
								Large	$\frac{0.55 - B}{0.7 - C}$
7) A		B		C		D		Small	$\frac{0.1 - A}{0.3 - B}$
								Large	$\frac{0.4 - C}{0.98 - D}$
8) A		B		C		D		Small	$\frac{0.03 - A}{0.2 - B}$
								Large	$\frac{0.45 - D}{0.92 - C}$

**Réponses**

- Ex. C,D,B,A
1. B,D,A,C
2. C,A,D,B
3. A,B,D,C
4. C,D,B,A
5. A,B,C,D
6. D,A,B,C
7. A,B,C,D
8. A,B,D,C



Classer les grilles, en fonction des zones colorées, de la plus petite à la plus grande.

Ex) A  B  C  D 

Small 0.15 - B  
0.3 - A  
0.5 - C  
Large 0.60 - D

**Réponses**

Ex. B,A,C,D

1. \_\_\_\_\_

2. \_\_\_\_\_

3. \_\_\_\_\_




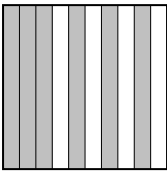
4. \_\_\_\_\_

5. \_\_\_\_\_




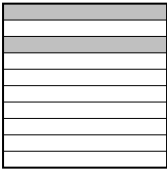
6. \_\_\_\_\_

7. \_\_\_\_\_





8. \_\_\_\_\_

1) A  B  C  D 




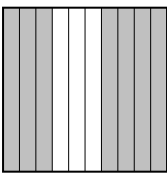
Small \_\_\_\_\_  
Large \_\_\_\_\_

2) A  B  C  D 




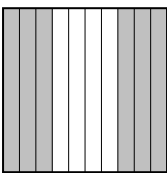
Small \_\_\_\_\_  
Large \_\_\_\_\_

3) A  B  C  D 



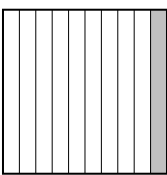

Small \_\_\_\_\_  
Large \_\_\_\_\_

4) A  B  C  D 

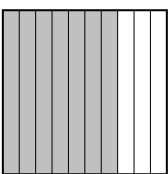

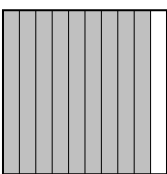

Small \_\_\_\_\_  
Large \_\_\_\_\_

5) A  B  C  D 

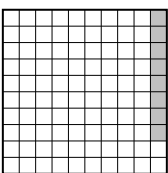
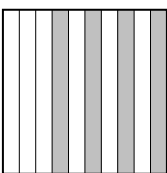
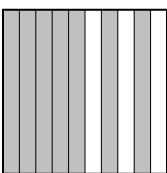

Small \_\_\_\_\_  
Large \_\_\_\_\_

6) A  B  C  D 

Small \_\_\_\_\_  
Large \_\_\_\_\_

7) A  B  C  D 

Small \_\_\_\_\_  
Large \_\_\_\_\_

8) A  B  C  D 

Small \_\_\_\_\_  
Large \_\_\_\_\_



Classer les grilles, en fonction des zones colorées, de la plus petite à la plus grande.

Ex)	A	B	C	D	Small $\frac{0.15 - B}{0.3 - A}$ $\frac{0.5 - C}{0.60 - D}$
1)	A	B	C	D	Small $\frac{0.07 - A}{0.26 - B}$ $\frac{0.35 - C}{0.6 - D}$
2)	A	B	C	D	Small $\frac{0.09 - A}{0.17 - B}$ $\frac{0.2 - D}{0.5 - C}$
3)	A	B	C	D	Small $\frac{0.51 - C}{0.7 - B}$ $\frac{0.8 - D}{0.9 - A}$
4)	A	B	C	D	Small $\frac{0.1 - A}{0.14 - C}$ $\frac{0.37 - B}{0.7 - D}$
5)	A	B	C	D	Small $\frac{0.4 - A}{0.51 - C}$ $\frac{0.6 - D}{0.8 - B}$
6)	A	B	C	D	Small $\frac{0.1 - C}{0.2 - A}$ $\frac{0.31 - B}{0.58 - D}$
7)	A	B	C	D	Small $\frac{0.5 - B}{0.7 - A}$ $\frac{0.85 - D}{0.9 - C}$
8)	A	B	C	D	Small $\frac{0.08 - A}{0.4 - B}$ $\frac{0.7 - C}{0.81 - D}$





**Réponses**

- Ex. B,A,C,D
1. A,B,C,D
2. A,B,D,C
3. C,B,D,A
4. A,C,B,D
5. A,C,D,B
6. C,A,B,D
7. B,A,D,C
8. A,B,C,D



Classer les grilles, en fonction des zones colorées, de la plus petite à la plus grande.

**Réponses**

Ex) A  B  C  D 

Small 0.10 - C  
0.16 - D  
0.6 - B  
Large 0.7 - A

Ex. C,D,B,A

1. \_\_\_\_\_

2. \_\_\_\_\_

3. \_\_\_\_\_





4. \_\_\_\_\_

5. \_\_\_\_\_


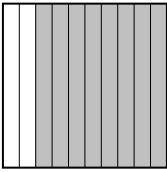


6. \_\_\_\_\_

7. \_\_\_\_\_

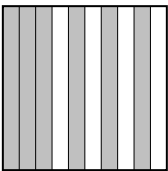
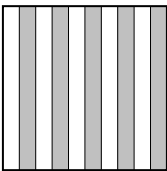


8. \_\_\_\_\_

1) A  B  C  D 





Small \_\_\_\_\_  
Large \_\_\_\_\_

2) A  B  C  D 





Small \_\_\_\_\_  
Large \_\_\_\_\_

3) A  B  C  D 


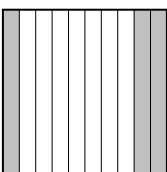
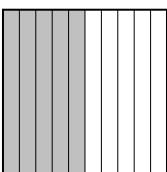

Small \_\_\_\_\_  
Large \_\_\_\_\_

4) A  B  C  D 

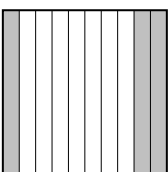



Small \_\_\_\_\_  
Large \_\_\_\_\_

5) A  B  C  D 

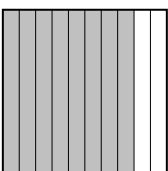

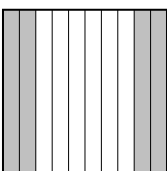

Small \_\_\_\_\_  
Large \_\_\_\_\_

6) A  B  C  D 

Small \_\_\_\_\_  
Large \_\_\_\_\_

7) A  B  C  D 

Small \_\_\_\_\_  
Large \_\_\_\_\_

8) A  B  C  D 

Small \_\_\_\_\_  
Large \_\_\_\_\_



Classer les grilles, en fonction des zones colorées, de la plus petite à la plus grande.

Ex)	A	B	C	D	Small <u>0.10 - C</u> <u>0.16 - D</u> <u>0.6 - B</u>
					Large <u>0.7 - A</u>
1)	A	B	C	D	Small <u>0.03 - D</u> <u>0.16 - B</u> <u>0.22 - C</u>
					Large <u>0.5 - A</u>
2)	A	B	C	D	Small <u>0.31 - D</u> <u>0.54 - C</u> <u>0.8 - B</u>
					Large <u>0.9 - A</u>
3)	A	B	C	D	Small <u>0.5 - B</u> <u>0.6 - A</u> <u>0.71 - C</u>
					Large <u>0.8 - D</u>
4)	A	B	C	D	Small <u>0.02 - A</u> <u>0.74 - D</u> <u>0.9 - C</u>
					Large <u>0.94 - B</u>
5)	A	B	C	D	Small <u>0.1 - B</u> <u>0.2 - A</u> <u>0.76 - C</u>
					Large <u>0.95 - D</u>
6)	A	B	C	D	Small <u>0.08 - A</u> <u>0.3 - B</u> <u>0.5 - C</u>
					Large <u>0.70 - D</u>
7)	A	B	C	D	Small <u>0.3 - A</u> <u>0.62 - C</u> <u>0.76 - D</u>
					Large <u>0.83 - B</u>
8)	A	B	C	D	Small <u>0.14 - B</u> <u>0.4 - C</u> <u>0.43 - D</u>
					Large <u>0.8 - A</u>


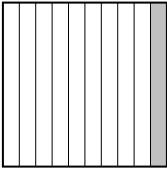

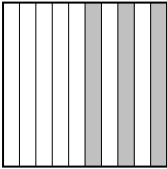
**Réponses**

- Ex. C,D,B,A
1. D,B,C,A
2. D,C,B,A
3. B,A,C,D
4. A,D,C,B
5. B,A,C,D
6. A,B,C,D
7. A,C,D,B
8. B,C,D,A



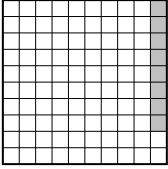





Classer les grilles, en fonction des zones colorées, de la plus petite à la plus grande.

Ex) A  B  C  D  Small 0.04 - A  
0.1 - B  
0.3 - D  
Large 0.90 - C

**Réponses**




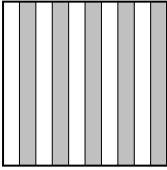
Ex. A,B,D,C

1) A  B  C  D  Small \_\_\_\_\_  
Large \_\_\_\_\_

1. \_\_\_\_\_

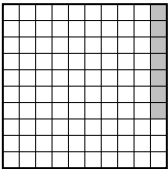
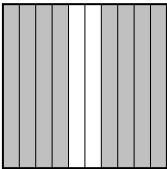
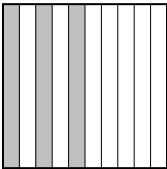
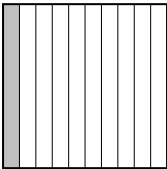
2. \_\_\_\_\_

3. \_\_\_\_\_

2) A  B  C  D  Small \_\_\_\_\_  
Large \_\_\_\_\_



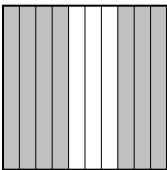

4. \_\_\_\_\_

5. \_\_\_\_\_




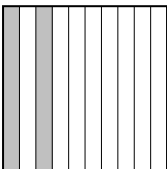
3) A  B  C  D  Small \_\_\_\_\_  
Large \_\_\_\_\_



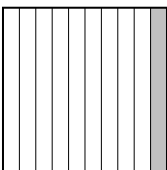

6. \_\_\_\_\_

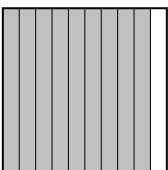
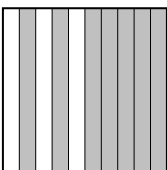


7. \_\_\_\_\_





4) A  B  C  D  Small \_\_\_\_\_  
Large \_\_\_\_\_

8. \_\_\_\_\_

5) A  B  C  D  Small \_\_\_\_\_  
Large \_\_\_\_\_

6) A  B  C  D  Small \_\_\_\_\_  
Large \_\_\_\_\_

7) A  B  C  D  Small \_\_\_\_\_  
Large \_\_\_\_\_

8) A  B  C  D  Small \_\_\_\_\_  
Large \_\_\_\_\_



Classer les grilles, en fonction des zones colorées, de la plus petite à la plus grande.

Ex)	A	B	C	D	Small $\frac{0.04 - A}{0.1 - B}$ $\frac{0.3 - D}{0.90 - C}$
1)	A	B	C	D	Small $\frac{0.08 - A}{0.1 - D}$ $\frac{0.3 - B}{0.38 - C}$
2)	A	B	C	D	Small $\frac{0.06 - A}{0.44 - B}$ $\frac{0.45 - C}{0.5 - D}$
3)	A	B	C	D	Small $\frac{0.07 - A}{0.1 - D}$ $\frac{0.3 - C}{0.8 - B}$
4)	A	B	C	D	Small $\frac{0.05 - B}{0.49 - D}$ $\frac{0.6 - A}{0.7 - C}$
5)	A	B	C	D	Small $\frac{0.09 - A}{0.2 - D}$ $\frac{0.76 - B}{0.94 - C}$
6)	A	B	C	D	Small $\frac{0.1 - C}{0.4 - B}$ $\frac{0.5 - A}{0.73 - D}$
7)	A	B	C	D	Small $\frac{0.4 - D}{0.50 - C}$ $\frac{0.7 - B}{0.9 - A}$
8)	A	B	C	D	Small $\frac{0.1 - C}{0.4 - A}$ $\frac{0.7 - D}{0.73 - B}$

**Réponses**

- Ex. A,B,D,C
1. A,D,B,C
2. A,B,C,D
3. A,D,C,B
4. B,D,A,C
5. A,D,B,C
6. C,B,A,D
7. D,C,B,A
8. C,A,D,B



Classer les grilles, en fonction des zones colorées, de la plus petite à la plus grande.

Ex) A B C D

Small 0.2 - A  
0.4 - B  
0.6 - C  
 Large 0.83 - D

**Réponses**

Ex. A,B,C,D

1) A B C D

Small \_\_\_\_\_  
 \_\_\_\_\_  
 Large \_\_\_\_\_

1. \_\_\_\_\_

2. \_\_\_\_\_

3. \_\_\_\_\_

2) A B C D

Small \_\_\_\_\_  
 \_\_\_\_\_  
 Large \_\_\_\_\_

4. \_\_\_\_\_

5. \_\_\_\_\_

3) A B C D

Small \_\_\_\_\_  
 \_\_\_\_\_  
 Large \_\_\_\_\_

6. \_\_\_\_\_

7. \_\_\_\_\_

4) A B C D

Small \_\_\_\_\_  
 \_\_\_\_\_  
 Large \_\_\_\_\_

8. \_\_\_\_\_

5) A B C D

Small \_\_\_\_\_  
 \_\_\_\_\_  
 Large \_\_\_\_\_

6) A B C D

Small \_\_\_\_\_  
 \_\_\_\_\_  
 Large \_\_\_\_\_

7) A B C D

Small \_\_\_\_\_  
 \_\_\_\_\_  
 Large \_\_\_\_\_

8) A B C D

Small \_\_\_\_\_  
 \_\_\_\_\_  
 Large \_\_\_\_\_



Classer les grilles, en fonction des zones colorées, de la plus petite à la plus grande.





Ex)	A	B	C	D	Small $\frac{0.2 - A}{0.4 - B}$ $\frac{0.6 - C}{0.83 - D}$
1)	A	B	C	D	Small $\frac{0.03 - A}{0.07 - B}$ $\frac{0.5 - C}{0.8 - D}$
2)	A	B	C	D	Small $\frac{0.04 - A}{0.1 - D}$ $\frac{0.3 - C}{0.70 - B}$
3)	A	B	C	D	Small $\frac{0.5 - A}{0.56 - C}$ $\frac{0.7 - B}{0.73 - D}$
4)	A	B	C	D	Small $\frac{0.02 - B}{0.4 - C}$ $\frac{0.42 - D}{0.8 - A}$
5)	A	B	C	D	Small $\frac{0.30 - D}{0.4 - C}$ $\frac{0.6 - A}{0.99 - B}$
6)	A	B	C	D	Small $\frac{0.02 - A}{0.1 - D}$ $\frac{0.45 - C}{0.6 - B}$
7)	A	B	C	D	Small $\frac{0.15 - B}{0.16 - C}$ $\frac{0.4 - A}{0.8 - D}$
8)	A	B	C	D	Small $\frac{0.07 - A}{0.22 - D}$ $\frac{0.5 - C}{0.6 - B}$

**Réponses**

- Ex. A,B,C,D
1. A,B,C,D
2. A,D,C,B
3. A,C,B,D
4. B,C,D,A
5. D,C,A,B
6. A,D,C,B
7. B,C,A,D
8. A,D,C,B



Classer les grilles, en fonction des zones colorées, de la plus petite à la plus grande.

Ex) A  B  C  D 

Small 0.3 - C  
0.6 - D  
0.7 - A  
Large 0.79 - B

**Réponses**

Ex. C,D,A,B

1. \_\_\_\_\_

2. \_\_\_\_\_

3. \_\_\_\_\_


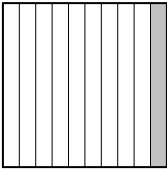


4. \_\_\_\_\_

5. \_\_\_\_\_


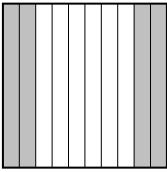


6. \_\_\_\_\_

7. \_\_\_\_\_





8. \_\_\_\_\_

1) A  B  C  D 

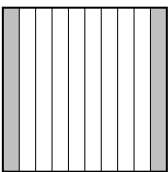



Small \_\_\_\_\_  
Large \_\_\_\_\_

2) A  B  C  D 




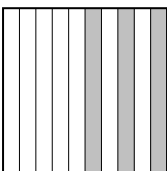
Small \_\_\_\_\_  
Large \_\_\_\_\_

3) A  B  C  D 

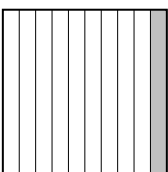


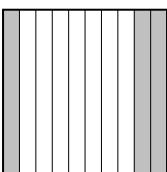
Small \_\_\_\_\_  
Large \_\_\_\_\_

4) A  B  C  D 


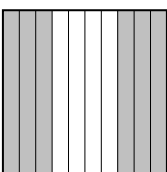


Small \_\_\_\_\_  
Large \_\_\_\_\_

5) A  B  C  D 





Small \_\_\_\_\_  
Large \_\_\_\_\_

6) A  B  C  D 

Small \_\_\_\_\_  
Large \_\_\_\_\_

7) A  B  C  D 

Small \_\_\_\_\_  
Large \_\_\_\_\_

8) A  B  C  D 

Small \_\_\_\_\_  
Large \_\_\_\_\_



Classer les grilles, en fonction des zones colorées, de la plus petite à la plus grande.


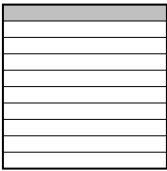


Ex)	A	B	C	D	Small $\frac{0.3 - C}{0.6 - D}$ $\frac{0.7 - A}{0.79 - B}$
					Large
1)	A	B	C	D	Small $\frac{0.06 - A}{0.1 - B}$ $\frac{0.40 - C}{0.4 - C}$
					Large
2)	A	B	C	D	Small $\frac{0.06 - C}{0.16 - D}$ $\frac{0.4 - B}{0.9 - A}$
					Large
3)	A	B	C	D	Small $\frac{0.08 - A}{0.2 - B}$ $\frac{0.3 - C}{0.49 - D}$
					Large
4)	A	B	C	D	Small $\frac{0.08 - D}{0.2 - A}$ $\frac{0.46 - B}{0.6 - C}$
					Large
5)	A	B	C	D	Small $\frac{0.04 - A}{0.11 - B}$ $\frac{0.3 - D}{0.8 - C}$
					Large
6)	A	B	C	D	Small $\frac{0.1 - A}{0.3 - D}$ $\frac{0.44 - C}{0.51 - B}$
					Large
7)	A	B	C	D	Small $\frac{0.02 - A}{0.5 - C}$ $\frac{0.60 - B}{0.6 - B}$
					Large
8)	A	B	C	D	Small $\frac{0.05 - A}{0.7 - B}$ $\frac{0.72 - D}{0.8 - C}$
					Large

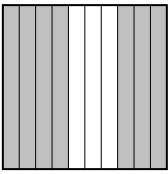

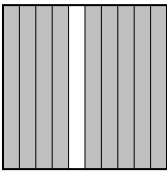

**Réponses**



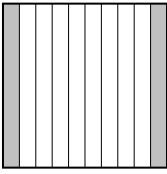

- Ex. C,D,A,B
1. A,B,C,C
2. C,D,B,A
3. A,B,C,D
4. D,A,B,C
5. A,B,D,C
6. A,D,C,B
7. A,C,B,B
8. A,B,D,C

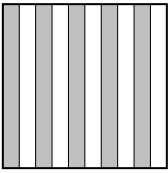


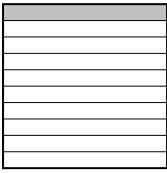




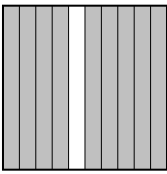
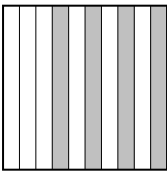
Classer les grilles, en fonction des zones colorées, de la plus petite à la plus grande.





Ex) A  B  C  D  Small 0.03 - A  
0.1 - B  
0.47 - D  
 Large 0.7 - C

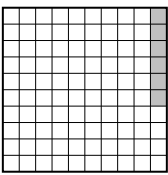
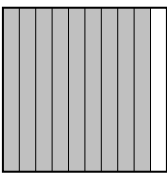
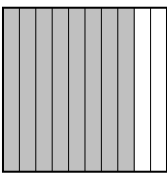
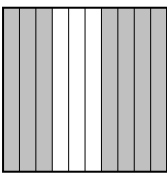
1) A  B  C  D  Small \_\_\_\_\_  
 \_\_\_\_\_  
 Large \_\_\_\_\_





2) A  B  C  D  Small \_\_\_\_\_  
 \_\_\_\_\_  
 Large \_\_\_\_\_



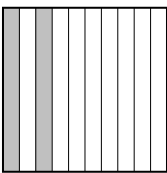

3) A  B  C  D  Small \_\_\_\_\_  
 \_\_\_\_\_  
 Large \_\_\_\_\_

4) A  B  C  D  Small \_\_\_\_\_  
 \_\_\_\_\_  
 Large \_\_\_\_\_

5) A  B  C  D  Small \_\_\_\_\_  
 \_\_\_\_\_  
 Large \_\_\_\_\_

6) A  B  C  D  Small \_\_\_\_\_  
 \_\_\_\_\_  
 Large \_\_\_\_\_

7) A  B  C  D  Small \_\_\_\_\_  
 \_\_\_\_\_  
 Large \_\_\_\_\_

8) A  B  C  D  Small \_\_\_\_\_  
 \_\_\_\_\_  
 Large \_\_\_\_\_

**Réponses**

Ex. A,B,D,C

1. \_\_\_\_\_

2. \_\_\_\_\_

3. \_\_\_\_\_

4. \_\_\_\_\_

5. \_\_\_\_\_

6. \_\_\_\_\_

7. \_\_\_\_\_

8. \_\_\_\_\_



Classer les grilles, en fonction des zones colorées, de la plus petite à la plus grande.

Ex)	A	B	C	D	Small $\frac{0.03 - A}{0.1 - B}$ $\frac{0.47 - D}{0.7 - C}$
					Large
1)	A	B	C	D	Small $\frac{0.6 - B}{0.7 - A}$ $\frac{0.80 - D}{0.9 - C}$
					Large
2)	A	B	C	D	Small $\frac{0.01 - A}{0.14 - D}$ $\frac{0.2 - C}{0.9 - B}$
					Large
3)	A	B	C	D	Small $\frac{0.06 - B}{0.1 - D}$ $\frac{0.25 - C}{0.5 - A}$
					Large
4)	A	B	C	D	Small $\frac{0.08 - A}{0.4 - D}$ $\frac{0.7 - B}{0.9 - C}$
					Large
5)	A	B	C	D	Small $\frac{0.1 - C}{0.2 - A}$ $\frac{0.59 - B}{0.76 - D}$
					Large
6)	A	B	C	D	Small $\frac{0.06 - A}{0.7 - D}$ $\frac{0.8 - C}{0.9 - B}$
					Large
7)	A	B	C	D	Small $\frac{0.16 - B}{0.3 - A}$ $\frac{0.53 - C}{0.78 - D}$
					Large
8)	A	B	C	D	Small $\frac{0.2 - C}{0.3 - B}$ $\frac{0.6 - A}{0.69 - D}$
					Large

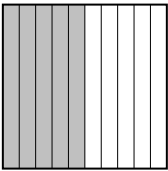



**Réponses**

- Ex. A,B,D,C
1. B,A,D,C
2. A,D,C,B
3. B,D,C,A
4. A,D,B,C
5. C,A,B,D
6. A,D,C,B
7. B,A,C,D
8. C,B,A,D





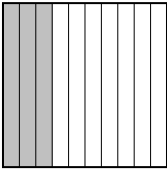





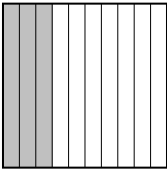

Classer les grilles, en fonction des zones colorées, de la plus petite à la plus grande.

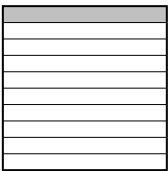


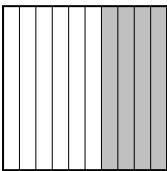
Ex) A  B  C  D  Small 0.17 - B  
0.39 - C  
0.5 - A  
Large 0.57 - D

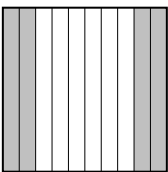



**Réponses**

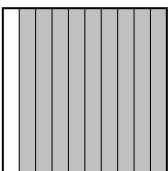
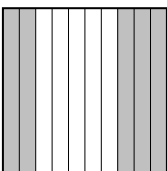


Ex. B,C,A,D


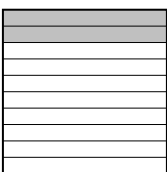


1) A  B  C  D  Small \_\_\_\_\_  
Large \_\_\_\_\_




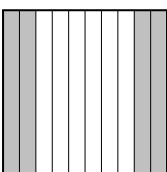
2) A  B  C  D  Small \_\_\_\_\_  
Large \_\_\_\_\_

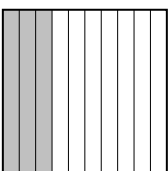


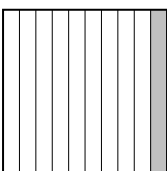
3) A  B  C  D  Small \_\_\_\_\_  
Large \_\_\_\_\_

4) A  B  C  D  Small \_\_\_\_\_  
Large \_\_\_\_\_

5) A  B  C  D  Small \_\_\_\_\_  
Large \_\_\_\_\_

6) A  B  C  D  Small \_\_\_\_\_  
Large \_\_\_\_\_

7) A  B  C  D  Small \_\_\_\_\_  
Large \_\_\_\_\_

8) A  B  C  D  Small \_\_\_\_\_  
Large \_\_\_\_\_

1. \_\_\_\_\_
2. \_\_\_\_\_
3. \_\_\_\_\_
4. \_\_\_\_\_
5. \_\_\_\_\_
6. \_\_\_\_\_
7. \_\_\_\_\_
8. \_\_\_\_\_



Classer les grilles, en fonction des zones colorées, de la plus petite à la plus grande.

Ex)	A	B	C	D	Small $\frac{0.17 - B}{0.39 - C}$ $\frac{0.5 - A}{0.57 - D}$
1)	A	B	C	D	Small $\frac{0.09 - A}{0.19 - D}$ $\frac{0.3 - C}{0.61 - B}$
2)	A	B	C	D	Small $\frac{0.05 - A}{0.1 - B}$ $\frac{0.3 - C}{0.99 - D}$
3)	A	B	C	D	Small $\frac{0.1 - A}{0.36 - C}$ $\frac{0.4 - D}{0.75 - B}$
4)	A	B	C	D	Small $\frac{0.14 - B}{0.4 - A}$ $\frac{0.40 - A}{0.7 - C}$
5)	A	B	C	D	Small $\frac{0.01 - C}{0.5 - B}$ $\frac{0.9 - A}{0.96 - D}$
6)	A	B	C	D	Small $\frac{0.08 - A}{0.2 - B}$ $\frac{0.32 - D}{0.4 - C}$
7)	A	B	C	D	Small $\frac{0.03 - A}{0.4 - D}$ $\frac{0.46 - C}{0.5 - B}$
8)	A	B	C	D	Small $\frac{0.1 - D}{0.24 - C}$ $\frac{0.28 - B}{0.3 - A}$

**Réponses**

- Ex. B,C,A,D
1. A,D,C,B
2. A,B,C,D
3. A,C,D,B
4. B,A,A,C
5. C,B,A,D
6. A,B,D,C
7. A,D,C,B
8. D,C,B,A



Classer les grilles, en fonction des zones colorées, de la plus petite à la plus grande.

**Réponses**

Ex) A B C D

Small 0.2 - A  
0.22 - C  
0.3 - D  
Large 0.4 - B

Ex. A,C,D,B

1. \_\_\_\_\_

2. \_\_\_\_\_

3. \_\_\_\_\_

4. \_\_\_\_\_

5. \_\_\_\_\_

6. \_\_\_\_\_

7. \_\_\_\_\_

8. \_\_\_\_\_

1) A B C D

Small \_\_\_\_\_  
Large \_\_\_\_\_

2) A B C D

Small \_\_\_\_\_  
Large \_\_\_\_\_

3) A B C D

Small \_\_\_\_\_  
Large \_\_\_\_\_

4) A B C D

Small \_\_\_\_\_  
Large \_\_\_\_\_

5) A B C D

Small \_\_\_\_\_  
Large \_\_\_\_\_

6) A B C D

Small \_\_\_\_\_  
Large \_\_\_\_\_

7) A B C D

Small \_\_\_\_\_  
Large \_\_\_\_\_

8) A B C D

Small \_\_\_\_\_  
Large \_\_\_\_\_



Classer les grilles, en fonction des zones colorées, de la plus petite à la plus grande.

Ex) A		B		C		D		Small	$\frac{0.2 - A}{0.22 - C}$
								Large	$\frac{0.3 - D}{0.4 - B}$
1) A		B		C		D		Small	$\frac{0.2 - B}{0.20 - B}$
								Large	$\frac{0.6 - A}{0.66 - C}$
2) A		B		C		D		Small	$\frac{0.01 - A}{0.18 - D}$
								Large	$\frac{0.5 - C}{0.6 - B}$
3) A		B		C		D		Small	$\frac{0.5 - B}{0.8 - A}$
								Large	$\frac{0.89 - D}{0.94 - C}$
4) A		B		C		D		Small	$\frac{0.2 - B}{0.3 - A}$
								Large	$\frac{0.35 - C}{0.49 - D}$
5) A		B		C		D		Small	$\frac{0.07 - A}{0.2 - B}$
								Large	$\frac{0.23 - C}{0.3 - D}$
6) A		B		C		D		Small	$\frac{0.5 - A}{0.64 - B}$
								Large	$\frac{0.7 - D}{0.97 - C}$
7) A		B		C		D		Small	$\frac{0.14 - D}{0.2 - B}$
								Large	$\frac{0.77 - C}{0.9 - A}$
8) A		B		C		D		Small	$\frac{0.1 - A}{0.5 - C}$
								Large	$\frac{0.55 - D}{0.88 - B}$

**Réponses**

- Ex. A,C,D,B
1. B,B,A,C
2. A,D,C,B
3. B,A,D,C
4. B,A,C,D
5. A,B,C,D
6. A,B,D,C
7. D,B,C,A
8. A,C,D,B