
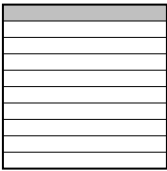


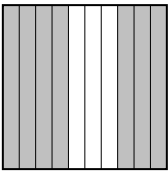

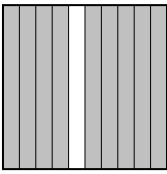





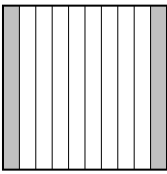



Classer les grilles, en fonction des zones colorées, de la plus petite à la plus grande.

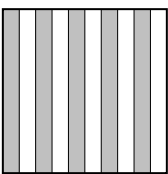



Ex) A  B  C  D  Small 0.03 - A
0.1 - B
0.47 - D
 Large 0.7 - C

1) A  B  C  D  Small _____



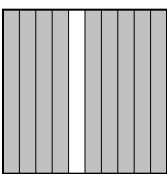
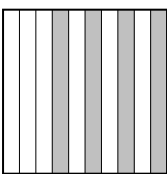
 Large _____

2) A  B  C  D  Small _____





 Large _____

3) A  B  C  D  Small _____

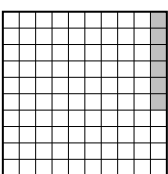
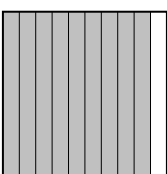
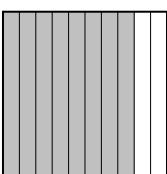
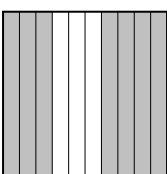
 Large _____

4) A  B  C  D  Small _____





 Large _____

5) A  B  C  D  Small _____



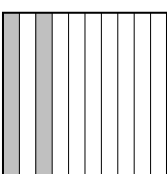

 Large _____

6) A  B  C  D  Small _____

 Large _____

7) A  B  C  D  Small _____

 Large _____

8) A  B  C  D  Small _____

 Large _____

Réponses

Ex. A,B,D,C

1. _____

2. _____

3. _____

4. _____

5. _____

6. _____

7. _____

8. _____



Classer les grilles, en fonction des zones colorées, de la plus petite à la plus grande.

Ex)	A	B	C	D	Small $\frac{0.03 - A}{0.1 - B}$ $\frac{0.47 - D}{0.7 - C}$
					Large
1)	A	B	C	D	Small $\frac{0.6 - B}{0.7 - A}$ $\frac{0.80 - D}{0.9 - C}$
					Large
2)	A	B	C	D	Small $\frac{0.01 - A}{0.14 - D}$ $\frac{0.2 - C}{0.9 - B}$
					Large
3)	A	B	C	D	Small $\frac{0.06 - B}{0.1 - D}$ $\frac{0.25 - C}{0.5 - A}$
					Large
4)	A	B	C	D	Small $\frac{0.08 - A}{0.4 - D}$ $\frac{0.7 - B}{0.9 - C}$
					Large
5)	A	B	C	D	Small $\frac{0.1 - C}{0.2 - A}$ $\frac{0.59 - B}{0.76 - D}$
					Large
6)	A	B	C	D	Small $\frac{0.06 - A}{0.7 - D}$ $\frac{0.8 - C}{0.9 - B}$
					Large
7)	A	B	C	D	Small $\frac{0.16 - B}{0.3 - A}$ $\frac{0.53 - C}{0.78 - D}$
					Large
8)	A	B	C	D	Small $\frac{0.2 - C}{0.3 - B}$ $\frac{0.6 - A}{0.69 - D}$
					Large

Réponses

- Ex. A,B,D,C
1. B,A,D,C
2. A,D,C,B
3. B,D,C,A
4. A,D,B,C
5. C,A,B,D
6. A,D,C,B
7. B,A,C,D
8. C,B,A,D