







Classer les grilles, en fonction des zones colorées, de la plus petite à la plus grande.

Réponses

Ex) A  B  C  D  Small 0.3 - C
0.6 - D
0.7 - A
Large 0.79 - B

Ex. C,D,A,B

1. _____

2. _____

3. _____





4. _____


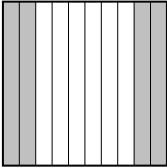


5. _____





6. _____

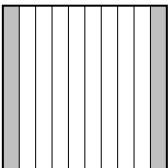



7. _____




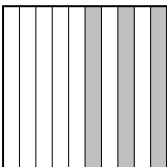
8. _____

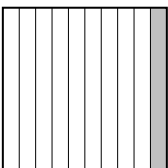

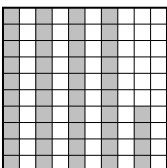
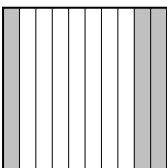
1) A  B  C  D  Small _____
Large _____


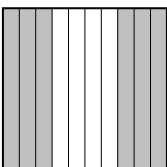


2) A  B  C  D  Small _____
Large _____





3) A  B  C  D  Small _____
Large _____

4) A  B  C  D  Small _____
Large _____

5) A  B  C  D  Small _____
Large _____

6) A  B  C  D  Small _____
Large _____

7) A  B  C  D  Small _____
Large _____

8) A  B  C  D  Small _____
Large _____



Classer les grilles, en fonction des zones colorées, de la plus petite à la plus grande.

Ex)	A	B	C	D	Small $\frac{0.3 - C}{0.6 - D}$ $\frac{0.7 - A}{0.79 - B}$
					Large
1)	A	B	C	D	Small $\frac{0.06 - A}{0.1 - B}$ $\frac{0.40 - C}{0.4 - C}$
					Large
2)	A	B	C	D	Small $\frac{0.06 - C}{0.16 - D}$ $\frac{0.4 - B}{0.9 - A}$
					Large
3)	A	B	C	D	Small $\frac{0.08 - A}{0.2 - B}$ $\frac{0.3 - C}{0.49 - D}$
					Large
4)	A	B	C	D	Small $\frac{0.08 - D}{0.2 - A}$ $\frac{0.46 - B}{0.6 - C}$
					Large
5)	A	B	C	D	Small $\frac{0.04 - A}{0.11 - B}$ $\frac{0.3 - D}{0.8 - C}$
					Large
6)	A	B	C	D	Small $\frac{0.1 - A}{0.3 - D}$ $\frac{0.44 - C}{0.51 - B}$
					Large
7)	A	B	C	D	Small $\frac{0.02 - A}{0.5 - C}$ $\frac{0.60 - B}{0.6 - B}$
					Large
8)	A	B	C	D	Small $\frac{0.05 - A}{0.7 - B}$ $\frac{0.72 - D}{0.8 - C}$
					Large

Réponses

- Ex. C,D,A,B
1. A,B,C,C
2. C,D,B,A
3. A,B,C,D
4. D,A,B,C
5. A,B,D,C
6. A,D,C,B
7. A,C,B,B
8. A,B,D,C