
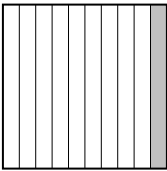

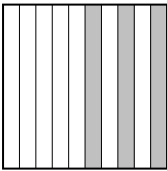


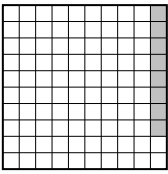


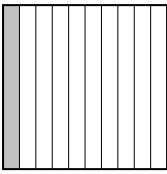


Classer les grilles, en fonction des zones colorées, de la plus petite à la plus grande.

Réponses

Ex) A  B  C  D  Small 0.04 - A
0.1 - B
0.3 - D
Large 0.90 - C





Ex. A,B,D,C

1) A  B  C  D  Small _____
Large _____

1. _____

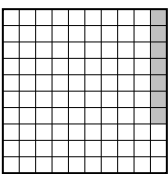
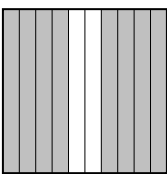
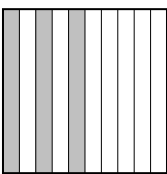
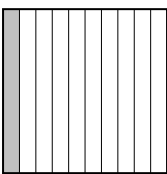
2. _____

3. _____

2) A  B  C  D  Small _____
Large _____



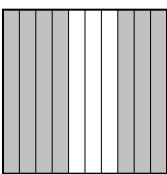

4. _____

5. _____




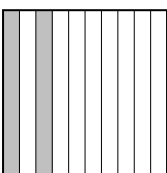
3) A  B  C  D  Small _____
Large _____



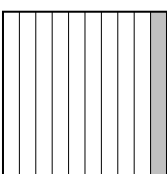

6. _____

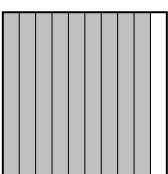
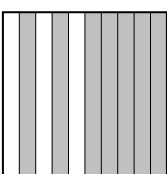


7. _____





4) A  B  C  D  Small _____
Large _____

8. _____

5) A  B  C  D  Small _____
Large _____

6) A  B  C  D  Small _____
Large _____

7) A  B  C  D  Small _____
Large _____

8) A  B  C  D  Small _____
Large _____



Classer les grilles, en fonction des zones colorées, de la plus petite à la plus grande.

Ex)	A	B	C	D	Small $\frac{0.04 - A}{0.1 - B}$ $\frac{0.3 - D}{0.90 - C}$
1)	A	B	C	D	Small $\frac{0.08 - A}{0.1 - D}$ $\frac{0.3 - B}{0.38 - C}$
2)	A	B	C	D	Small $\frac{0.06 - A}{0.44 - B}$ $\frac{0.45 - C}{0.5 - D}$
3)	A	B	C	D	Small $\frac{0.07 - A}{0.1 - D}$ $\frac{0.3 - C}{0.8 - B}$
4)	A	B	C	D	Small $\frac{0.05 - B}{0.49 - D}$ $\frac{0.6 - A}{0.7 - C}$
5)	A	B	C	D	Small $\frac{0.09 - A}{0.2 - D}$ $\frac{0.76 - B}{0.94 - C}$
6)	A	B	C	D	Small $\frac{0.1 - C}{0.4 - B}$ $\frac{0.5 - A}{0.73 - D}$
7)	A	B	C	D	Small $\frac{0.4 - D}{0.50 - C}$ $\frac{0.7 - B}{0.9 - A}$
8)	A	B	C	D	Small $\frac{0.1 - C}{0.4 - A}$ $\frac{0.7 - D}{0.73 - B}$

Réponses

- Ex. A,B,D,C
1. A,D,B,C
2. A,B,C,D
3. A,D,C,B
4. B,D,A,C
5. A,D,B,C
6. C,B,A,D
7. D,C,B,A
8. C,A,D,B