







Classer les grilles, en fonction des zones colorées, de la plus petite à la plus grande.

**Réponses**

Ex) A  B  C  D 

Small 0.10 - C  
0.16 - D  
0.6 - B  
Large 0.7 - A

Ex. C,D,B,A

1. \_\_\_\_\_

2. \_\_\_\_\_

3. \_\_\_\_\_





4. \_\_\_\_\_

5. \_\_\_\_\_


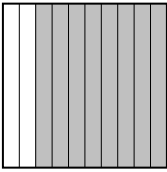


6. \_\_\_\_\_

7. \_\_\_\_\_

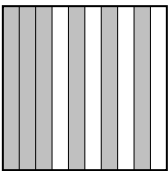
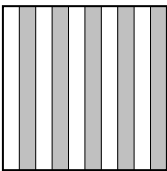


8. \_\_\_\_\_

1) A  B  C  D 





Small \_\_\_\_\_  
Large \_\_\_\_\_

2) A  B  C  D 





Small \_\_\_\_\_  
Large \_\_\_\_\_

3) A  B  C  D 


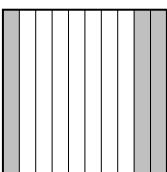
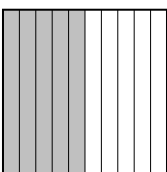

Small \_\_\_\_\_  
Large \_\_\_\_\_

4) A  B  C  D 

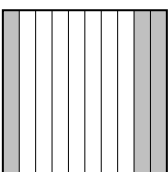



Small \_\_\_\_\_  
Large \_\_\_\_\_

5) A  B  C  D 

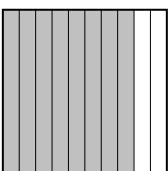

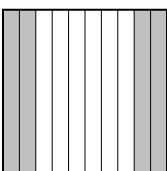

Small \_\_\_\_\_  
Large \_\_\_\_\_

6) A  B  C  D 

Small \_\_\_\_\_  
Large \_\_\_\_\_

7) A  B  C  D 

Small \_\_\_\_\_  
Large \_\_\_\_\_

8) A  B  C  D 

Small \_\_\_\_\_  
Large \_\_\_\_\_



Classer les grilles, en fonction des zones colorées, de la plus petite à la plus grande.

Ex)	A	B	C	D	Small $\frac{0.10 - C}{0.16 - D}$ $\frac{0.6 - B}{0.7 - A}$
1)	A	B	C	D	Small $\frac{0.03 - D}{0.16 - B}$ $\frac{0.22 - C}{0.5 - A}$
2)	A	B	C	D	Small $\frac{0.31 - D}{0.54 - C}$ $\frac{0.8 - B}{0.9 - A}$
3)	A	B	C	D	Small $\frac{0.5 - B}{0.6 - A}$ $\frac{0.71 - C}{0.8 - D}$
4)	A	B	C	D	Small $\frac{0.02 - A}{0.74 - D}$ $\frac{0.9 - C}{0.94 - B}$
5)	A	B	C	D	Small $\frac{0.1 - B}{0.2 - A}$ $\frac{0.76 - C}{0.95 - D}$
6)	A	B	C	D	Small $\frac{0.08 - A}{0.3 - B}$ $\frac{0.5 - C}{0.70 - D}$
7)	A	B	C	D	Small $\frac{0.3 - A}{0.62 - C}$ $\frac{0.76 - D}{0.83 - B}$
8)	A	B	C	D	Small $\frac{0.14 - B}{0.4 - C}$ $\frac{0.43 - D}{0.8 - A}$

**Réponses**

- Ex. C,D,B,A
1. D,B,C,A
2. D,C,B,A
3. B,A,C,D
4. A,D,C,B
5. B,A,C,D
6. A,B,C,D
7. A,C,D,B
8. B,C,D,A