

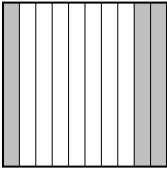





Classer les grilles, en fonction des zones colorées, de la plus petite à la plus grande.

Ex) A  B  C  D 

Small 0,08 - A  
0,34 - B  
0,3 - C  
Large 0,5 - D

**Réponses**

Ex. A,B,C,D

1. \_\_\_\_\_

2. \_\_\_\_\_

3. \_\_\_\_\_

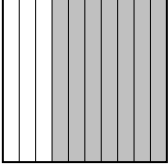


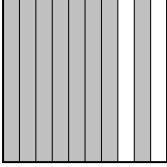
4. \_\_\_\_\_

5. \_\_\_\_\_


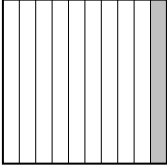


6. \_\_\_\_\_

7. \_\_\_\_\_

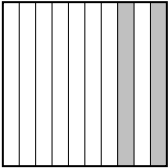



8. \_\_\_\_\_

1) A  B  C  D 





Small \_\_\_\_\_  
Large \_\_\_\_\_

2) A  B  C  D 

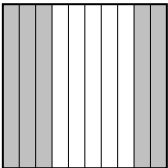
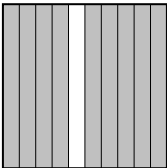


Small \_\_\_\_\_  
Large \_\_\_\_\_

3) A  B  C  D 

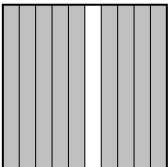



Small \_\_\_\_\_  
Large \_\_\_\_\_

4) A  B  C  D 





Small \_\_\_\_\_  
Large \_\_\_\_\_

5) A  B  C  D 




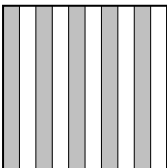
Small \_\_\_\_\_  
Large \_\_\_\_\_

6) A  B  C  D 

Small \_\_\_\_\_  
Large \_\_\_\_\_

7) A  B  C  D 

Small \_\_\_\_\_  
Large \_\_\_\_\_

8) A  B  C  D 

Small \_\_\_\_\_  
Large \_\_\_\_\_



Classer les grilles, en fonction des zones colorées, de la plus petite à la plus grande.

Ex)	A	B	C	D	Small $\frac{0,08 - A}{0,34 - B}$ $\frac{0,3 - C}{0,5 - D}$
					Large
1)	A	B	C	D	Small $\frac{0,68 - B}{0,76 - C}$ $\frac{0,7 - A}{0,8 - D}$
					Large
2)	A	B	C	D	Small $\frac{0,06 - A}{0,12 - C}$ $\frac{0,33 - D}{0,1 - B}$
					Large
3)	A	B	C	D	Small $\frac{0,56 - C}{0,83 - D}$ $\frac{0,2 - A}{0,5 - B}$
					Large
4)	A	B	C	D	Small $\frac{0,76 - D}{0,88 - C}$ $\frac{0,6 - A}{0,7 - B}$
					Large
5)	A	B	C	D	Small $\frac{0,04 - D}{0,37 - C}$ $\frac{0,5 - A}{0,9 - B}$
					Large
6)	A	B	C	D	Small $\frac{0,07 - D}{0,76 - B}$ $\frac{0,8 - C}{0,9 - A}$
					Large
7)	A	B	C	D	Small $\frac{0,35 - B}{0,74 - D}$ $\frac{0,4 - A}{0,5 - C}$
					Large
8)	A	B	C	D	Small $\frac{0,13 - C}{0,35 - B}$ $\frac{0,1 - A}{0,5 - D}$
					Large

**Réponses**

- Ex. A,B,C,D
1. B,C,A,D
2. A,C,D,B
3. C,D,A,B
4. D,C,A,B
5. D,C,A,B
6. D,B,C,A
7. B,D,A,C
8. C,B,A,D