


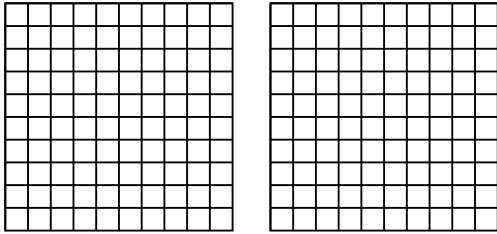


Utilisez la méthode visuelle pour résoudre chaque exercice.

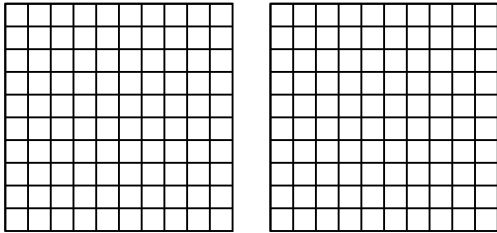
1) $3 \times 0,36 =$



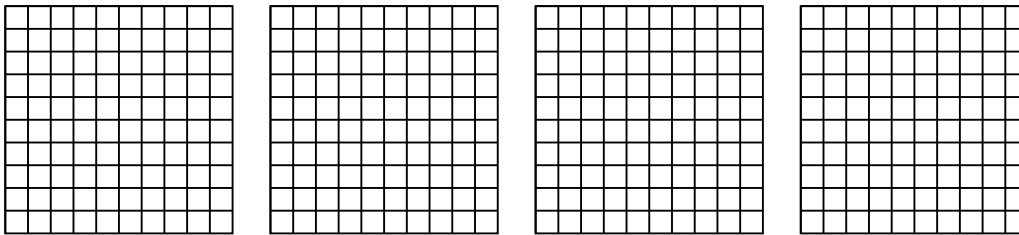
2) $2 \times 0,49 =$



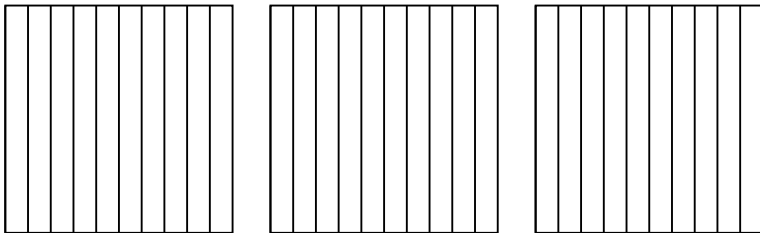
3) $2 \times 0,99 =$



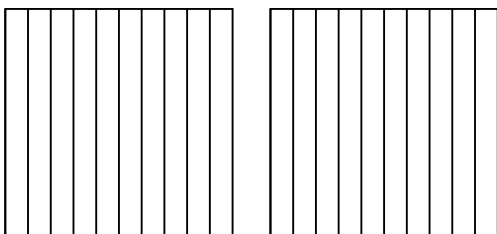
4) $4 \times 0,74 =$



5) $3 \times 0,4 =$



6) $2 \times 0,3 =$



Réponses

1. _____

2. _____

3. _____

4. _____

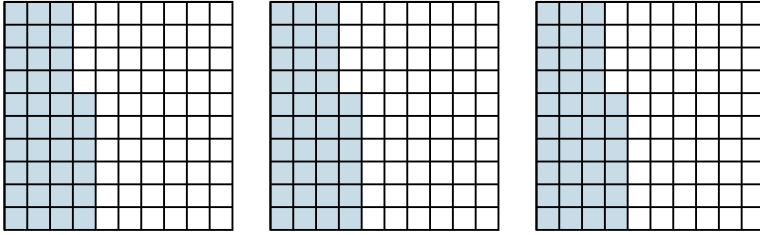
5. _____

6. _____

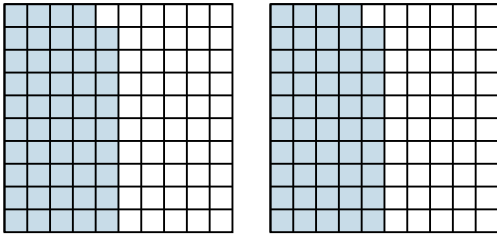


Utilisez la méthode visuelle pour résoudre chaque exercice.

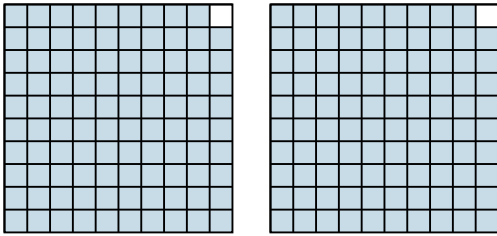
1) $3 \times 0,36 =$



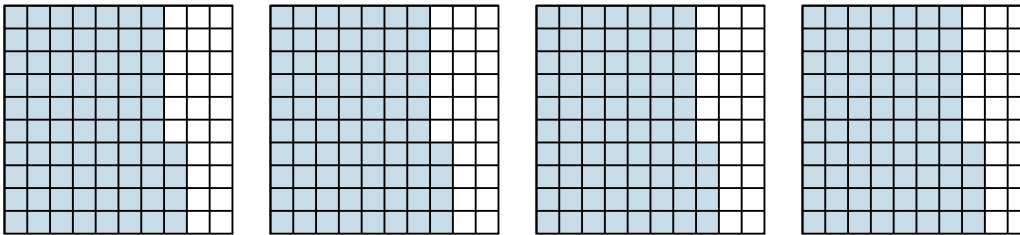
2) $2 \times 0,49 =$



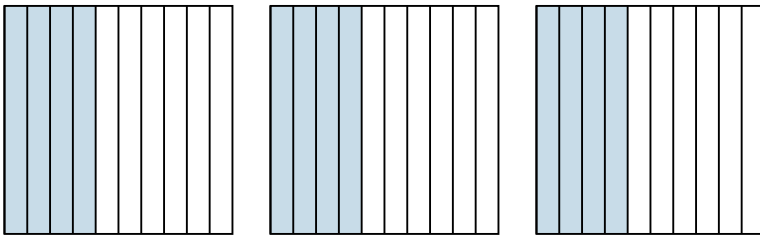
3) $2 \times 0,99 =$



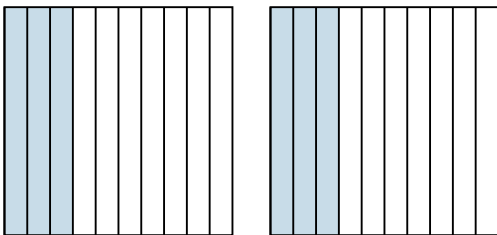
4) $4 \times 0,74 =$



5) $3 \times 0,4 =$



6) $2 \times 0,3 =$



Réponses

1. $\frac{108}{100} = 1,08$

2. $\frac{98}{100} = 0,98$

3. $\frac{198}{100} = 1,98$

4. $\frac{296}{100} = 2,96$

5. $\frac{12}{10} = 1,2$

6. $\frac{6}{10} = 0,6$