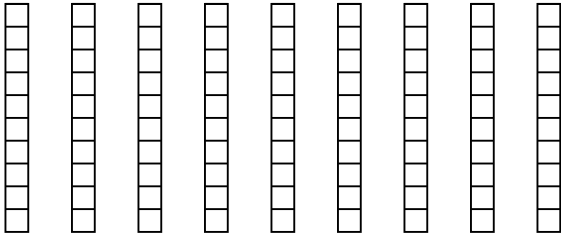


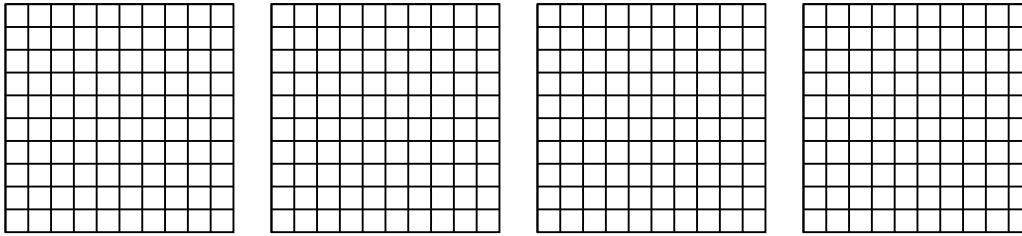


Utilisez la méthode visuelle pour résoudre chaque exercice.

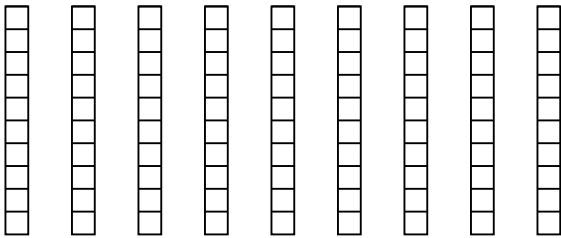
1) $9 \times 0.3 =$



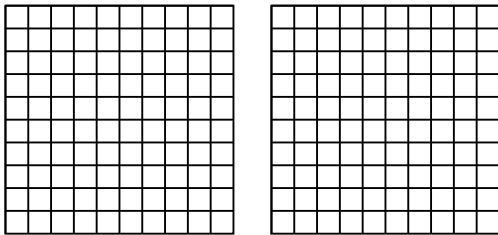
2) $4 \times 0.97 =$



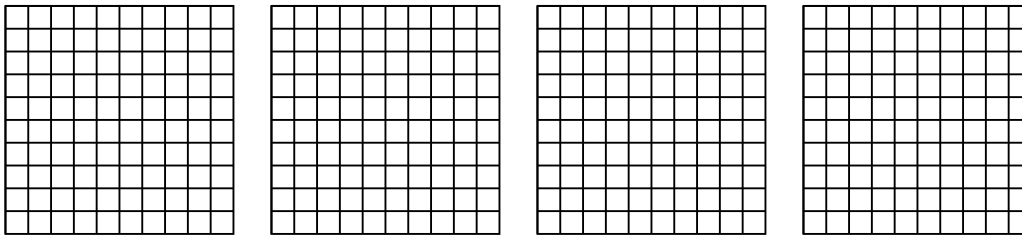
3) $9 \times 0.1 =$



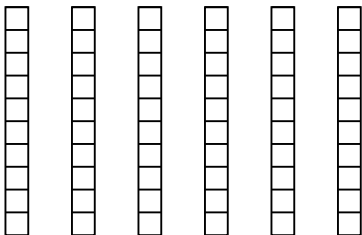
4) $2 \times 0.81 =$



5) $4 \times 0.36 =$



6) $6 \times 0.3 =$



Réponses

1. _____

2. _____

3. _____

4. _____

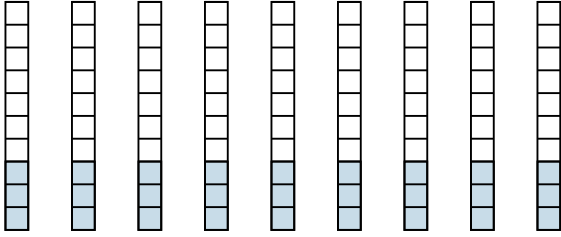
5. _____

6. _____

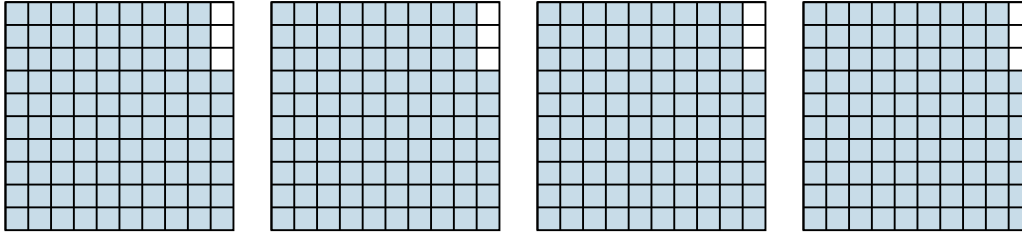


Utilisez la méthode visuelle pour résoudre chaque exercice.

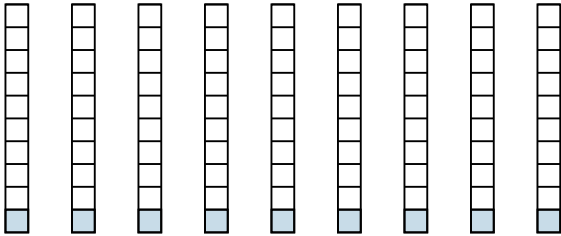
1) $9 \times 0.3 =$



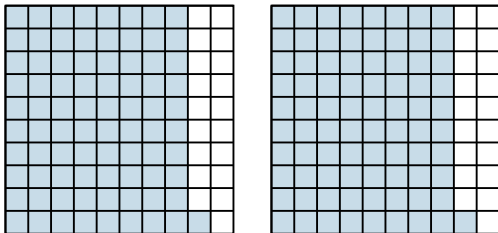
2) $4 \times 0.97 =$



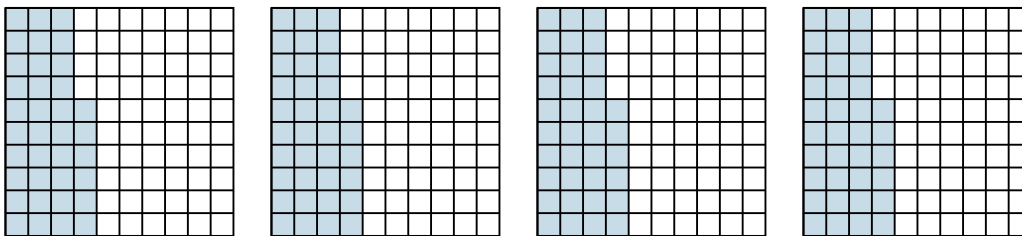
3) $9 \times 0.1 =$



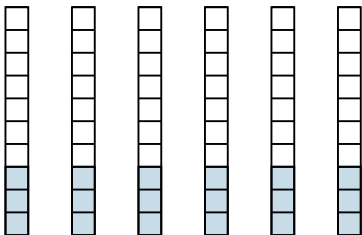
4) $2 \times 0.81 =$



5) $4 \times 0.36 =$



6) $6 \times 0.3 =$



Réponses

1. $\frac{27}{10} = 2.7$

2. $\frac{388}{100} = 3.88$

3. $\frac{9}{10} = 0.9$

4. $\frac{162}{100} = 1.62$

5. $\frac{144}{100} = 1.44$

6. $\frac{18}{10} = 1.8$