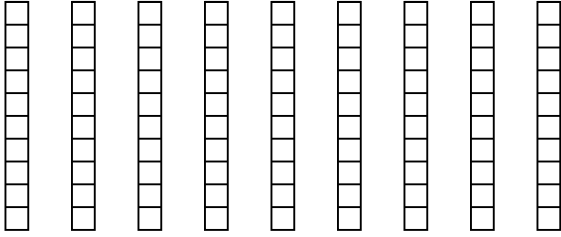


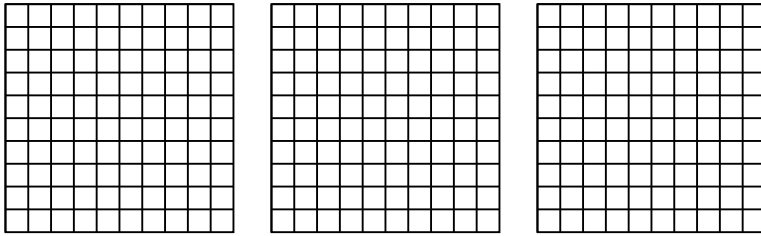


Utilisez la méthode visuelle pour résoudre chaque exercice.

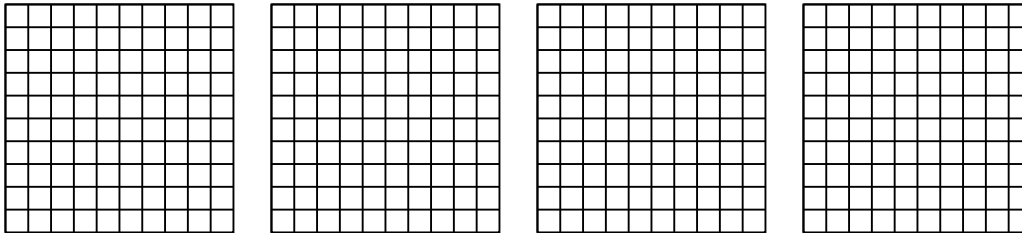
1)  $9 \times 0.5 =$



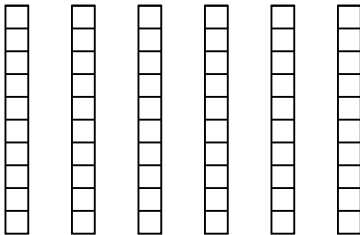
2)  $3 \times 0.80 =$



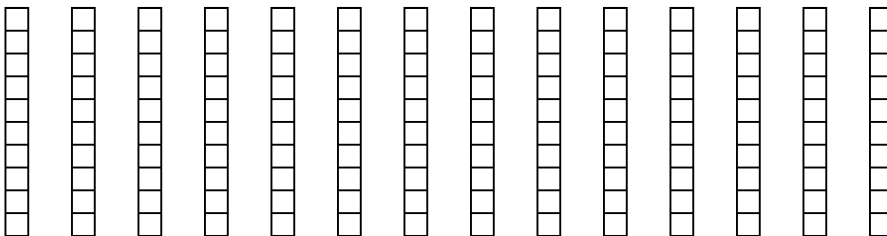
3)  $4 \times 0.22 =$



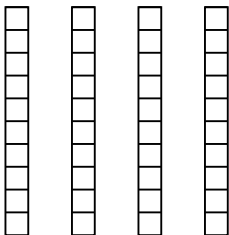
4)  $6 \times 0.6 =$



5)  $14 \times 0.5 =$



6)  $4 \times 0.6 =$



**Réponses**

1. \_\_\_\_\_

2. \_\_\_\_\_

3. \_\_\_\_\_

4. \_\_\_\_\_

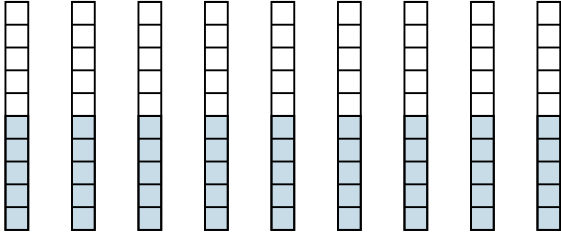
5. \_\_\_\_\_

6. \_\_\_\_\_

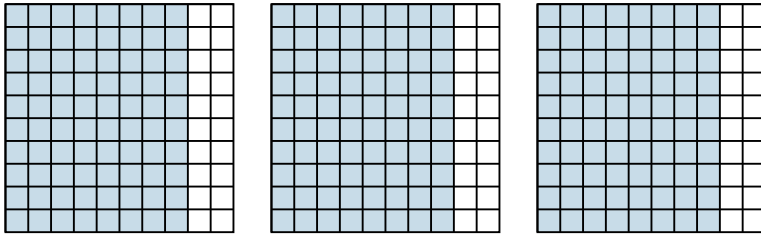


Utilisez la méthode visuelle pour résoudre chaque exercice.

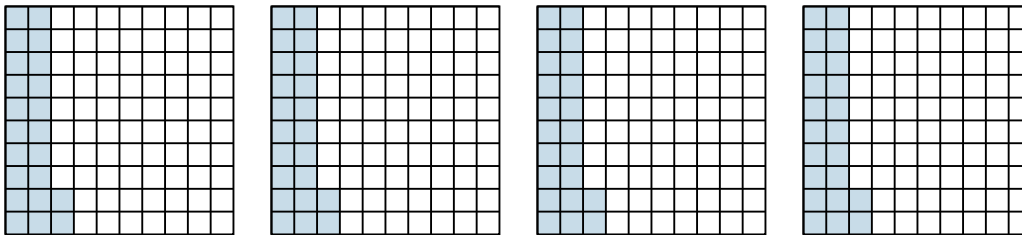
1)  $9 \times 0.5 =$



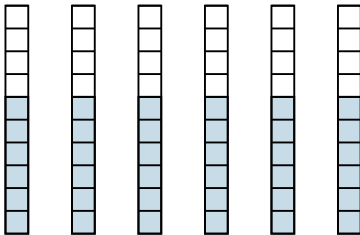
2)  $3 \times 0.80 =$



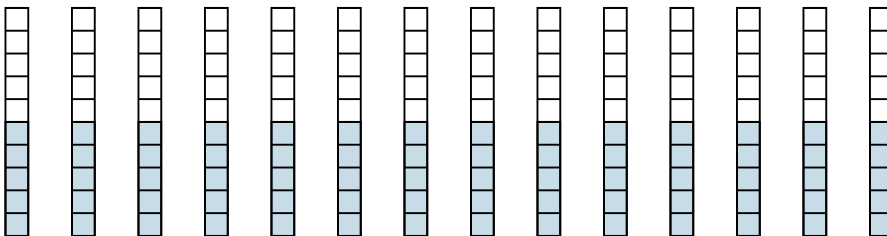
3)  $4 \times 0.22 =$




4)  $6 \times 0.6 =$



5)  $14 \times 0.5 =$



6)  $4 \times 0.6 =$



**Réponses**

1.  $\frac{45}{10} = 4.5$

2.  $\frac{240}{100} = 2.4$

3.  $\frac{88}{100} = 0.88$

4.  $\frac{36}{10} = 3.6$

5.  $\frac{70}{10} = 7$

6.  $\frac{24}{10} = 2.4$