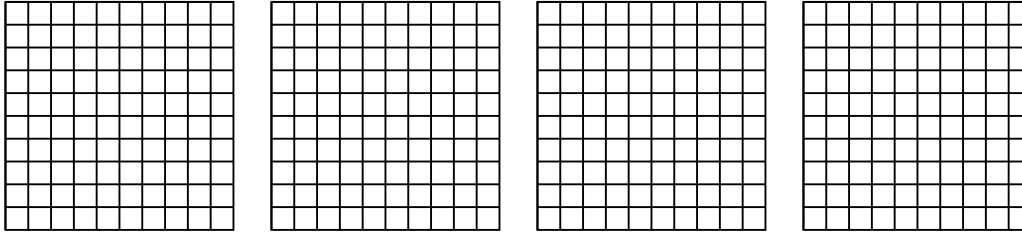


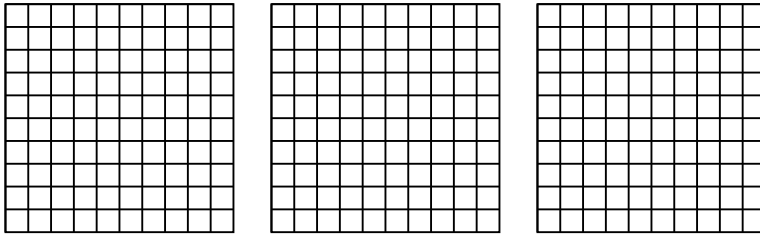


Utilisez la méthode visuelle pour résoudre chaque exercice.


1) $4 \times 0.15 =$



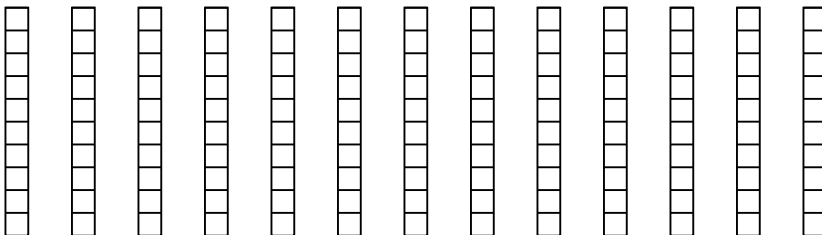
2) $3 \times 0.56 =$



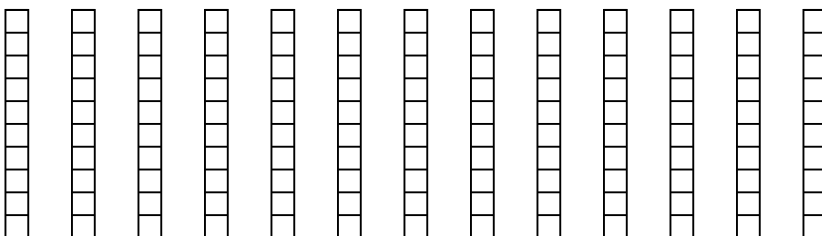
3) $3 \times 0.92 =$




4) $13 \times 0.8 =$



5) $13 \times 0.2 =$



6) $3 \times 0.15 =$



Réponses

1. _____

2. _____

3. _____

4. _____

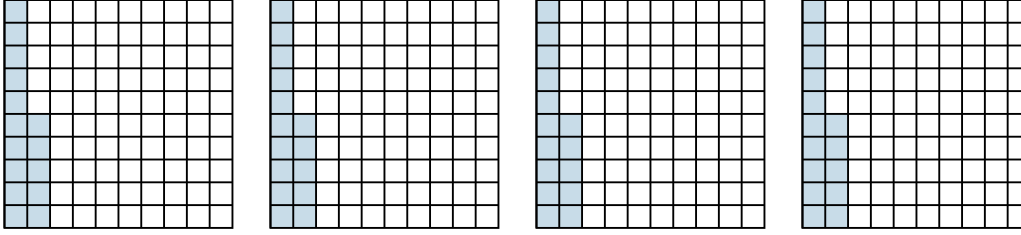
5. _____

6. _____

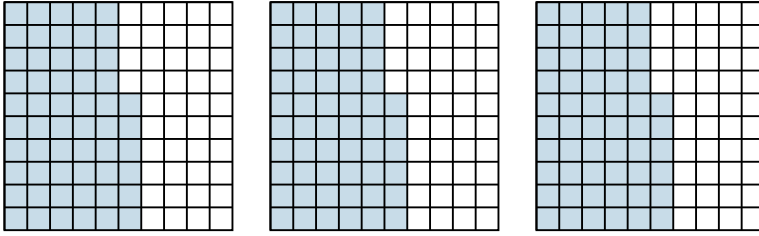


Utilisez la méthode visuelle pour résoudre chaque exercice.

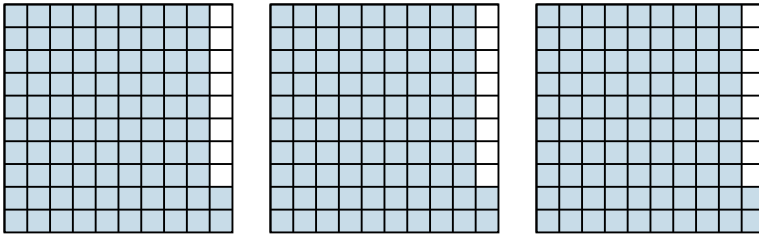
1) $4 \times 0.15 =$



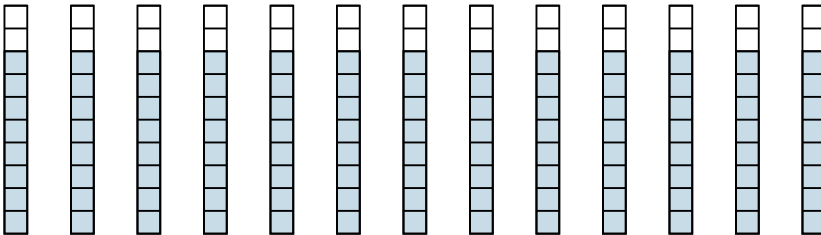
2) $3 \times 0.56 =$



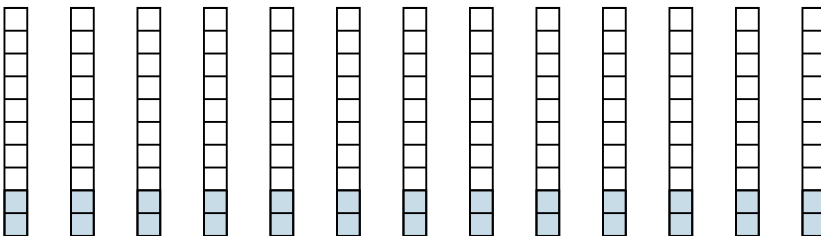
3) $3 \times 0.92 =$



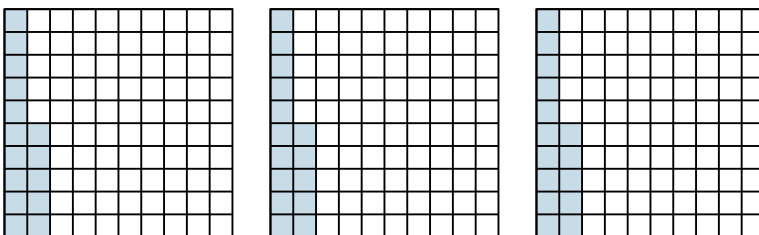
4) $13 \times 0.8 =$



5) $13 \times 0.2 =$



6) $3 \times 0.15 =$



Réponses

1. $\frac{60}{100} = 0.6$

2. $\frac{168}{100} = 1.68$

3. $\frac{276}{100} = 2.76$

4. $\frac{104}{10} = 10.4$

5. $\frac{26}{10} = 2.6$

6. $\frac{45}{100} = 0.45$