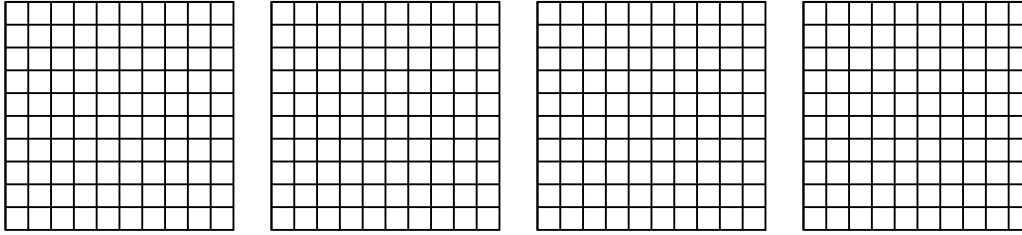


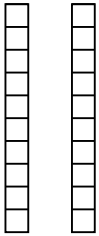


Utilisez la méthode visuelle pour résoudre chaque exercice.

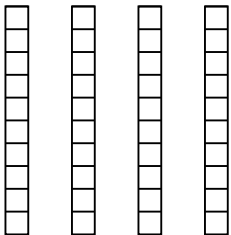
1) $4 \times 0.57 =$



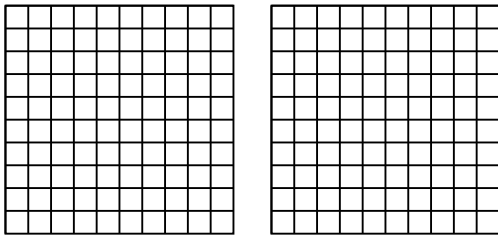
2) $2 \times 0.4 =$



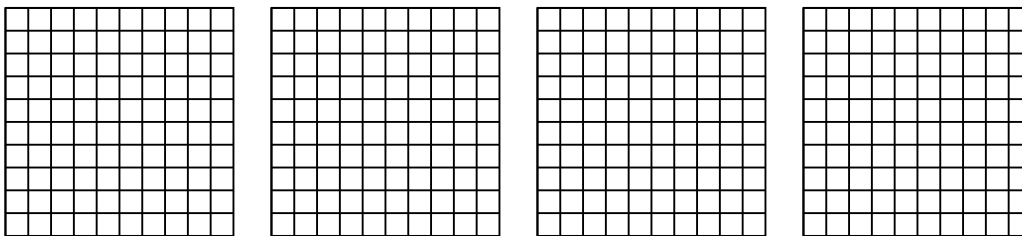
3) $4 \times 0.4 =$



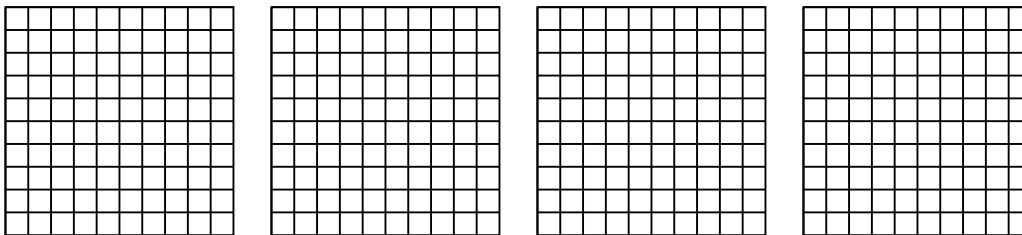
4) $2 \times 0.44 =$



5) $4 \times 0.81 =$



6) $4 \times 0.51 =$



Réponses

1. _____

2. _____

3. _____

4. _____

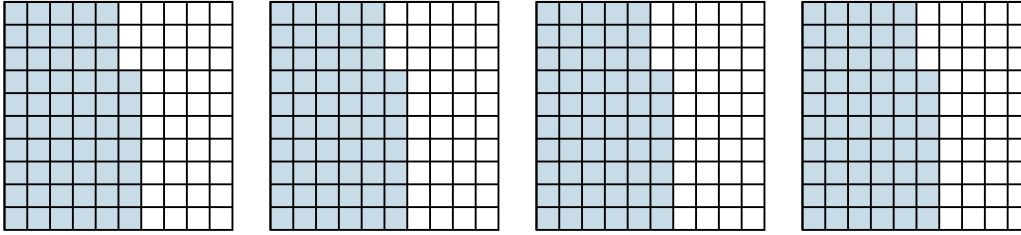
5. _____

6. _____

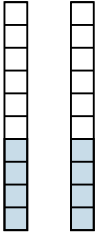


Utilisez la méthode visuelle pour résoudre chaque exercice.

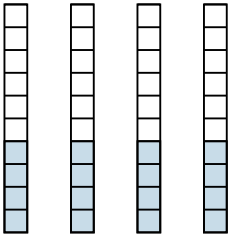
1) $4 \times 0.57 =$



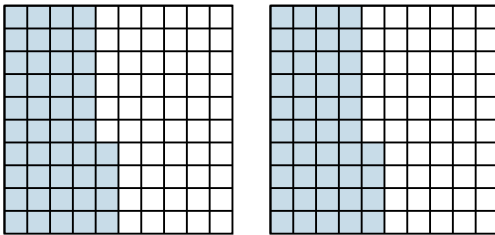
2) $2 \times 0.4 =$



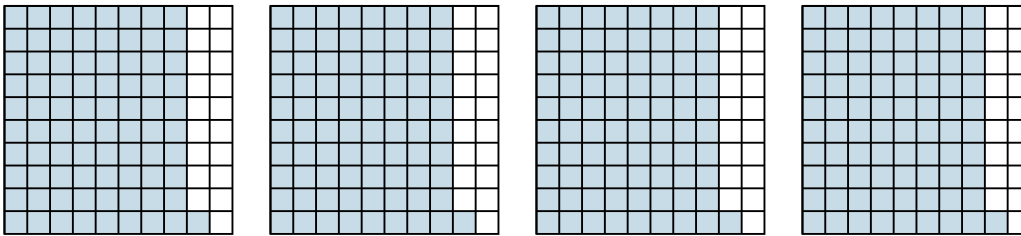
3) $4 \times 0.4 =$



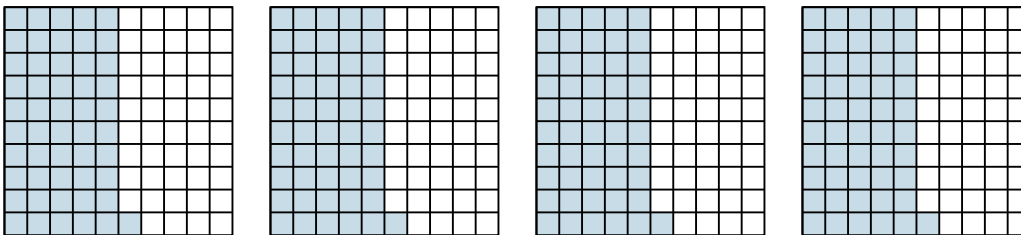
4) $2 \times 0.44 =$



5) $4 \times 0.81 =$



6) $4 \times 0.51 =$



Réponses

1. $\frac{228}{100} = 2.28$

2. $\frac{8}{10} = 0.8$

3. $\frac{16}{10} = 1.6$

4. $\frac{88}{100} = 0.88$

5. $\frac{324}{100} = 3.24$

6. $\frac{204}{100} = 2.04$