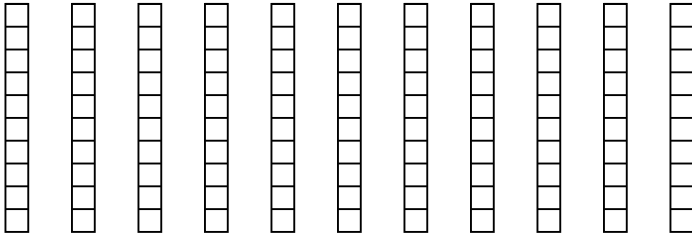


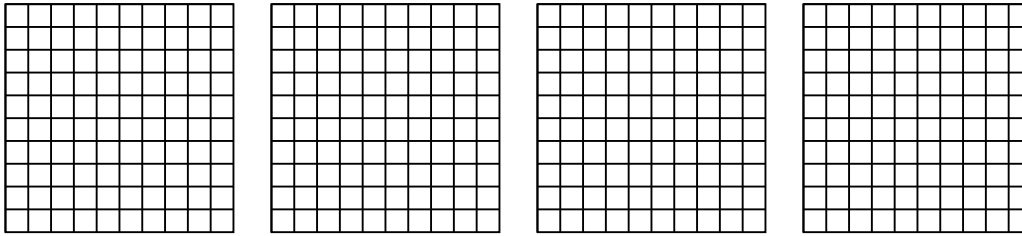


Utilisez la méthode visuelle pour résoudre chaque exercice.

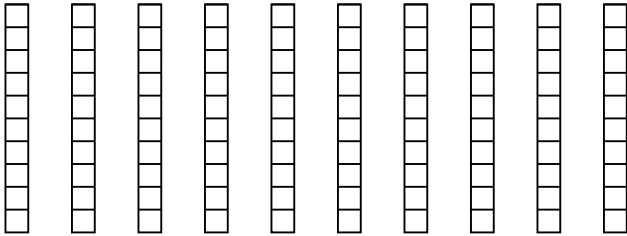
1)  $11 \times 0.1 =$



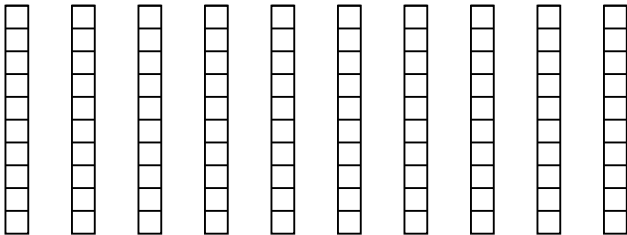
2)  $4 \times 0.82 =$



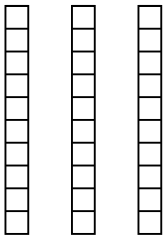
3)  $10 \times 0.5 =$



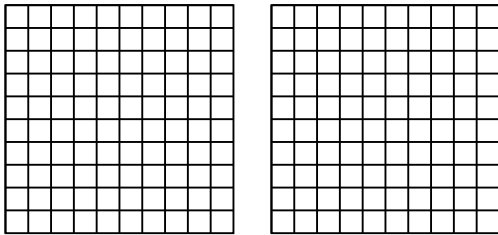
4)  $10 \times 0.9 =$



5)  $3 \times 0.9 =$



6)  $2 \times 0.80 =$



**Réponses**

1. \_\_\_\_\_

2. \_\_\_\_\_

3. \_\_\_\_\_

4. \_\_\_\_\_

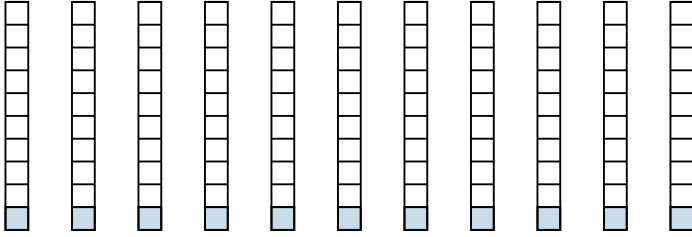
5. \_\_\_\_\_

6. \_\_\_\_\_

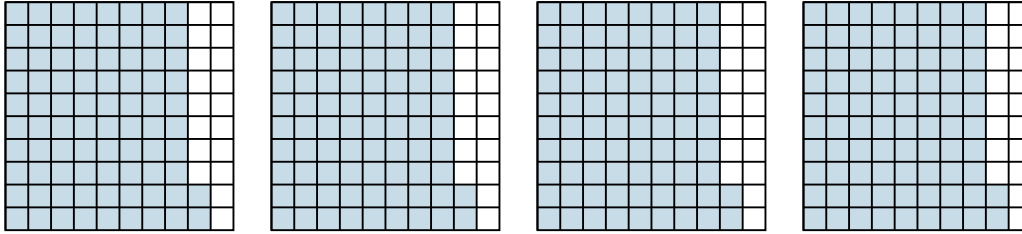


Utilisez la méthode visuelle pour résoudre chaque exercice.

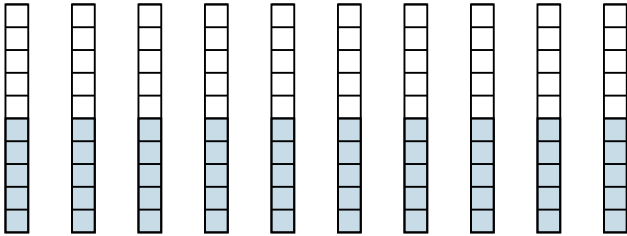
1)  $11 \times 0.1 =$



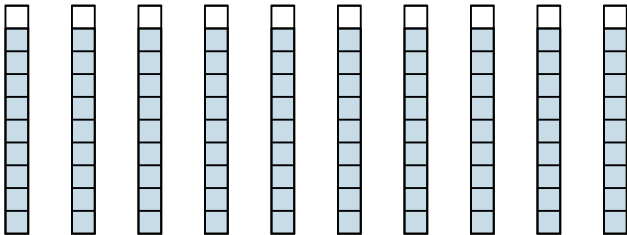
2)  $4 \times 0.82 =$



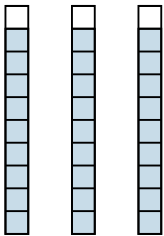
3)  $10 \times 0.5 =$



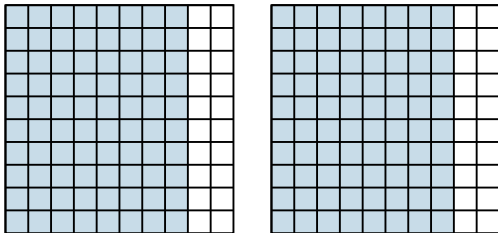
4)  $10 \times 0.9 =$



5)  $3 \times 0.9 =$



6)  $2 \times 0.80 =$



**Réponses**

1.  $\frac{11}{10} = 1.1$

2.  $\frac{328}{100} = 3.28$

3.  $\frac{50}{10} = 5$

4.  $\frac{90}{10} = 9$

5.  $\frac{27}{10} = 2.7$

6.  $\frac{160}{100} = 1.6$