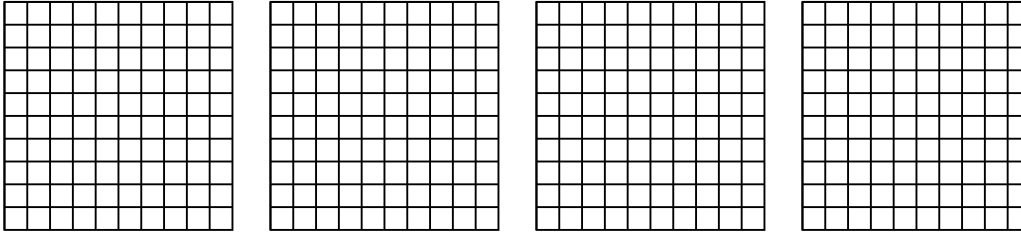


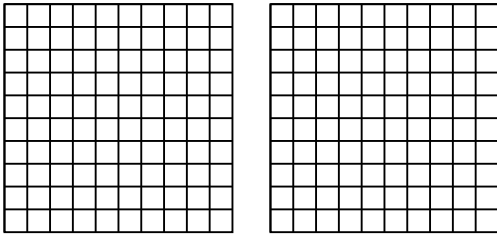


Utilisez la méthode visuelle pour résoudre chaque exercice.

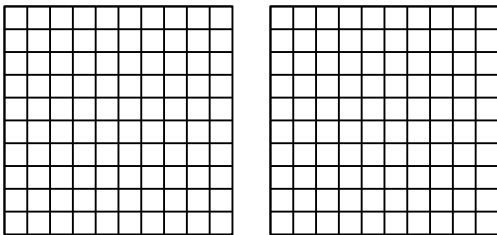
1) $4 \times 0.20 =$



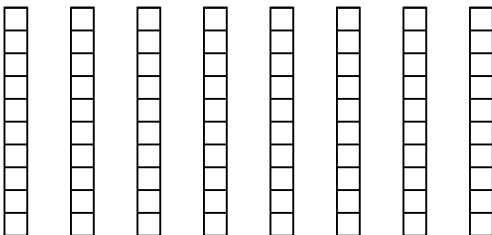
2) $2 \times 0.43 =$



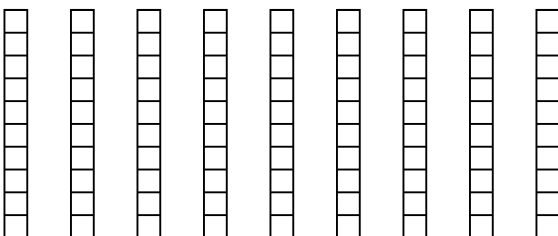
3) $2 \times 0.19 =$



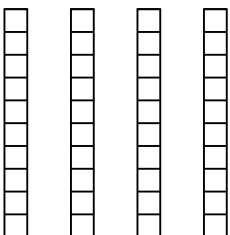
4) $8 \times 0.1 =$



5) $9 \times 0.9 =$



6) $4 \times 0.3 =$



Réponses

1. _____

2. _____

3. _____

4. _____

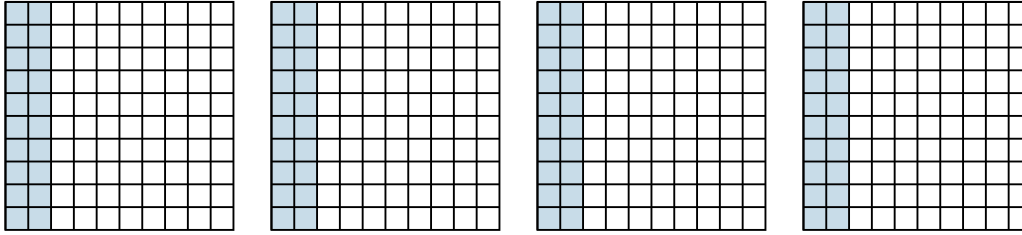
5. _____

6. _____

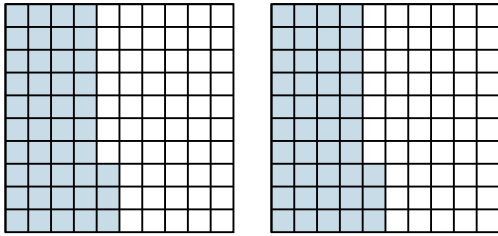


Utilisez la méthode visuelle pour résoudre chaque exercice.

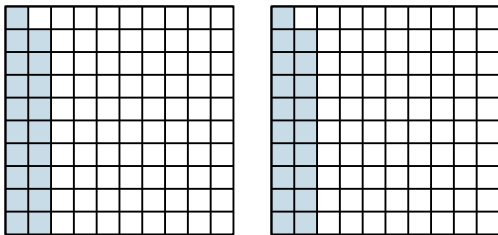
1) $4 \times 0.20 =$



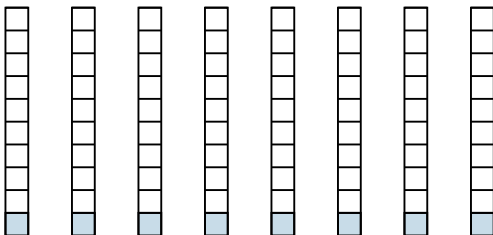
2) $2 \times 0.43 =$



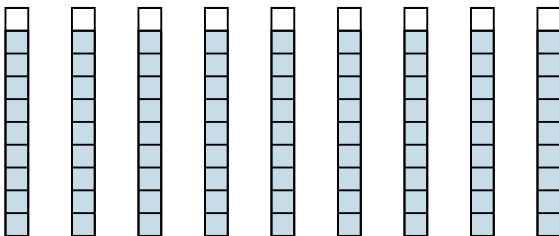
3) $2 \times 0.19 =$



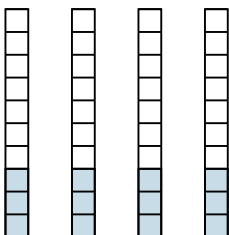
4) $8 \times 0.1 =$



5) $9 \times 0.9 =$



6) $4 \times 0.3 =$



Réponses

1. $\frac{80}{100} = 0.8$

2. $\frac{86}{100} = 0.86$

3. $\frac{38}{100} = 0.38$

4. $\frac{8}{10} = 0.8$

5. $\frac{81}{10} = 8.1$

6. $\frac{12}{10} = 1.2$