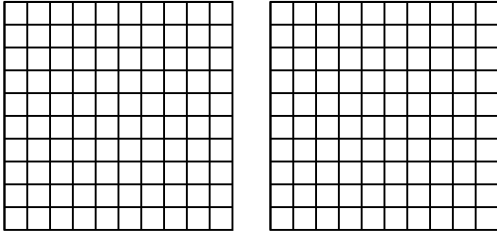


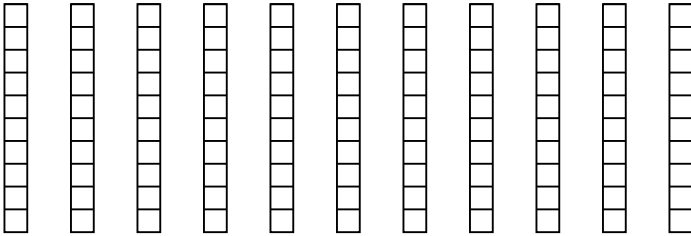


Utilisez la méthode visuelle pour résoudre chaque exercice.

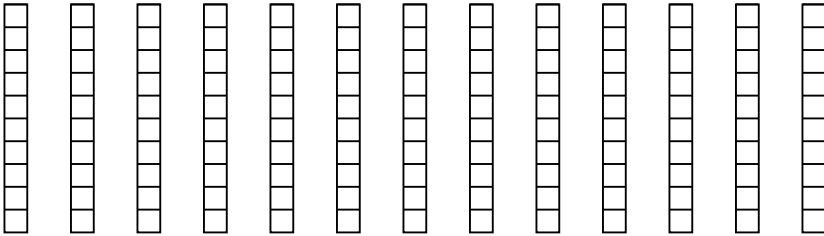
1) $2 \times 0.42 =$



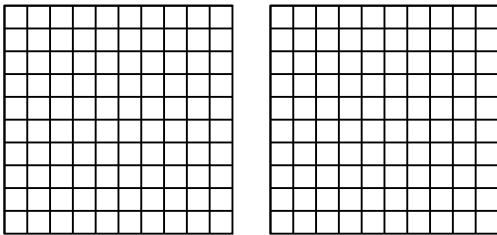
2) $11 \times 0.4 =$



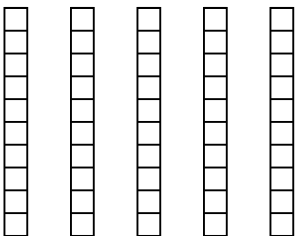
3) $13 \times 0.6 =$




4) $2 \times 0.26 =$



5) $5 \times 0.7 =$



6) $3 \times 0.97 =$



Réponses

1. _____

2. _____

3. _____

4. _____

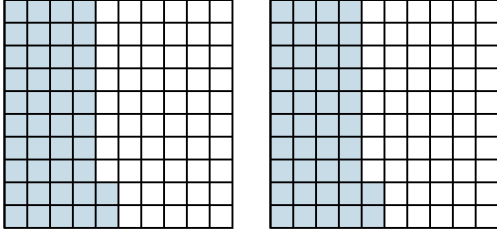
5. _____

6. _____

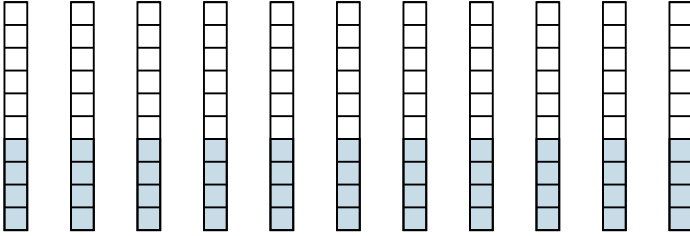


Utilisez la méthode visuelle pour résoudre chaque exercice.

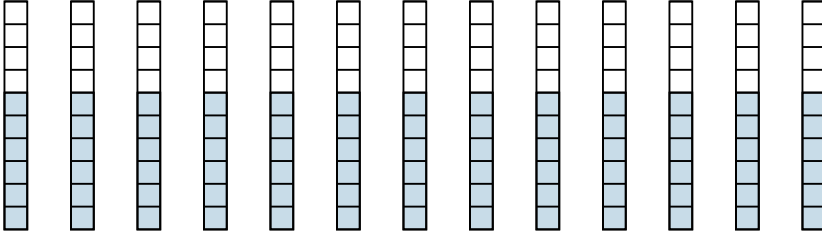
1) $2 \times 0.42 =$



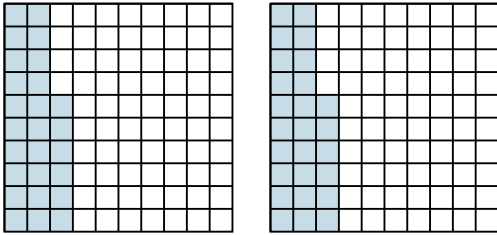
2) $11 \times 0.4 =$



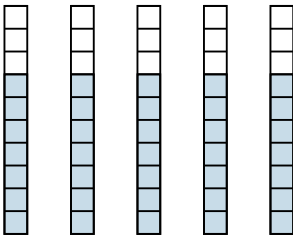
3) $13 \times 0.6 =$




4) $2 \times 0.26 =$



5) $5 \times 0.7 =$



6) $3 \times 0.97 =$



Réponses

1. $\frac{84}{100} = 0.84$

2. $\frac{44}{10} = 4.4$

3. $\frac{78}{10} = 7.8$

4. $\frac{52}{100} = 0.52$

5. $\frac{35}{10} = 3.5$

6. $\frac{291}{100} = 2.91$