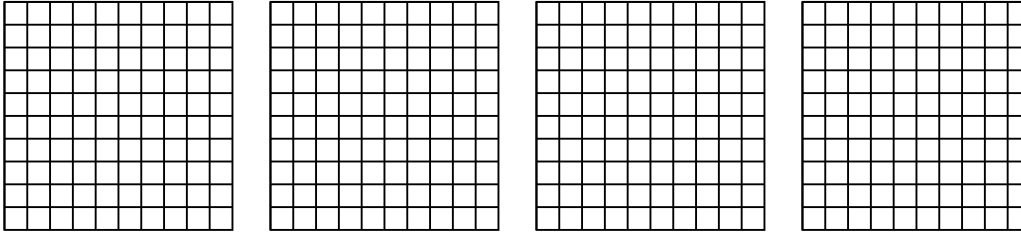


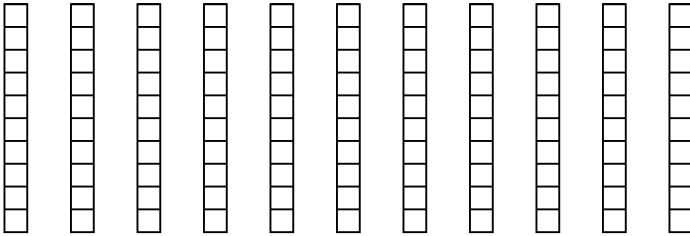


Utilisez la méthode visuelle pour résoudre chaque exercice.

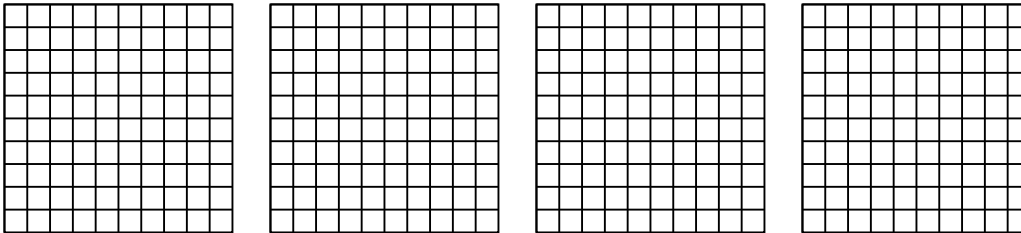
1) $4 \times 0.38 =$



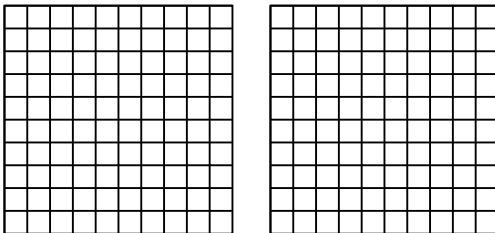
2) $11 \times 0.9 =$



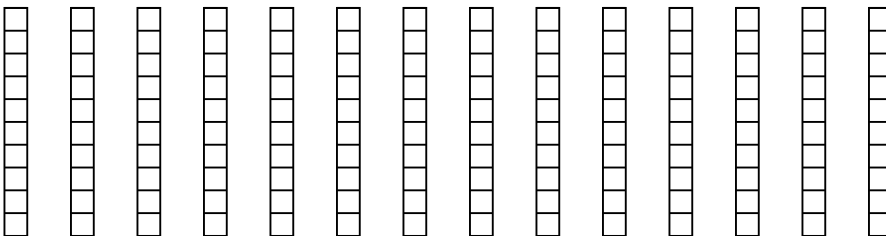
3) $4 \times 0.79 =$



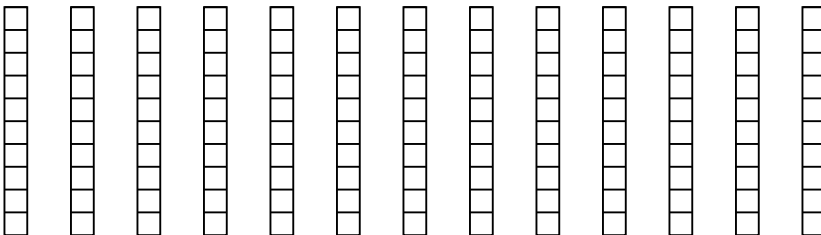
4) $2 \times 0.42 =$



5) $14 \times 0.8 =$



6) $13 \times 0.5 =$



Réponses

1. _____

2. _____

3. _____

4. _____

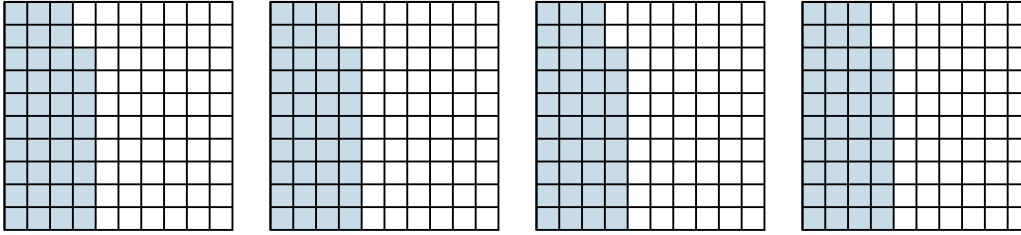
5. _____

6. _____

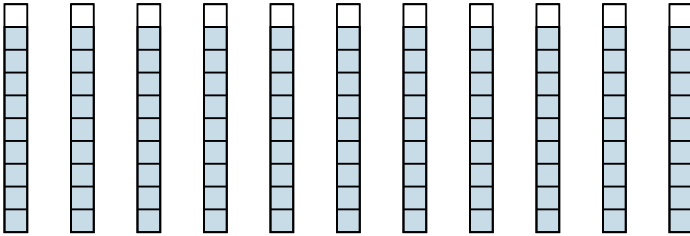


Utilisez la méthode visuelle pour résoudre chaque exercice.

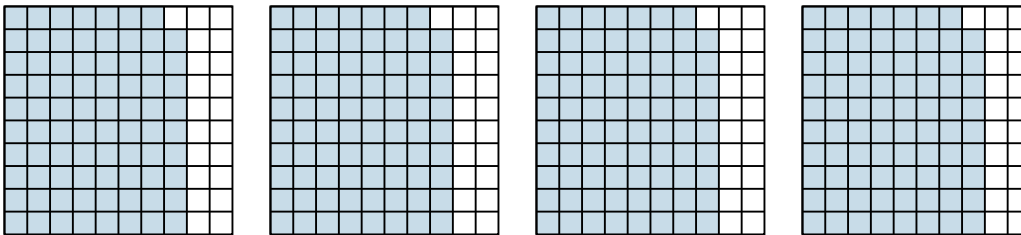
1) $4 \times 0.38 =$



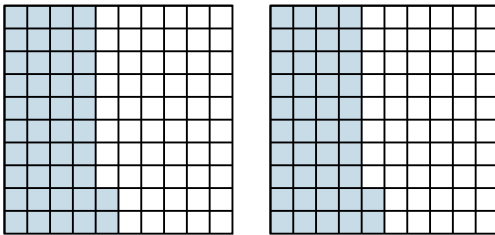
2) $11 \times 0.9 =$



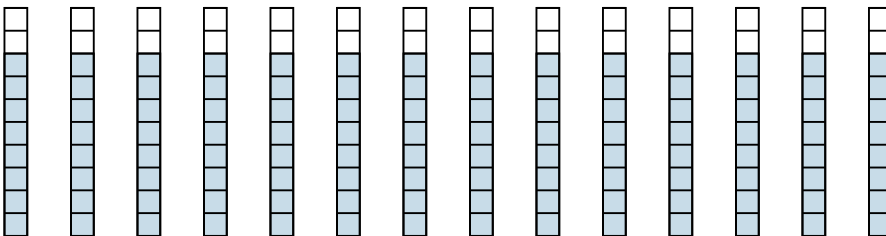
3) $4 \times 0.79 =$



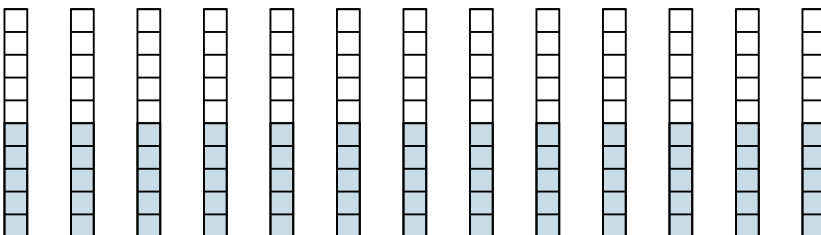
4) $2 \times 0.42 =$



5) $14 \times 0.8 =$



6) $13 \times 0.5 =$



Réponses

1. $\frac{152}{100} = 1.52$

2. $\frac{99}{10} = 9.9$

3. $\frac{316}{100} = 3.16$

4. $\frac{84}{100} = 0.84$

5. $\frac{112}{10} = 11.2$

6. $\frac{65}{10} = 6.5$