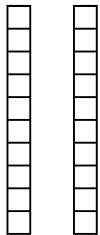


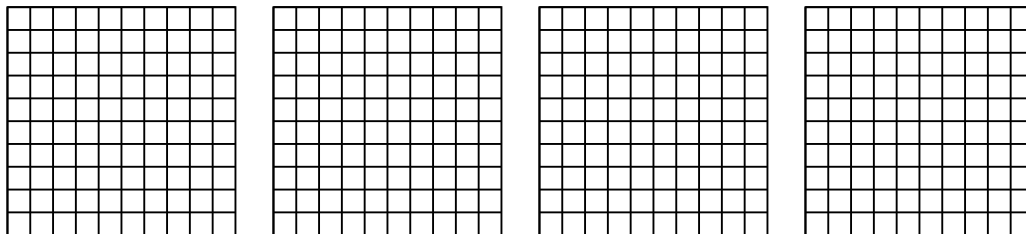


Utilisez la méthode visuelle pour résoudre chaque exercice.

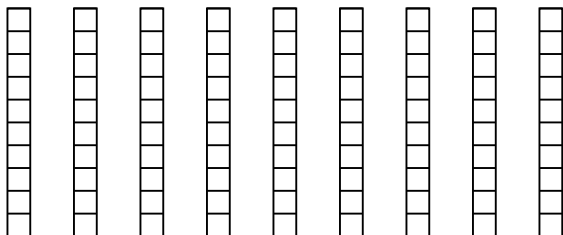
1) $2 \times 0.6 =$



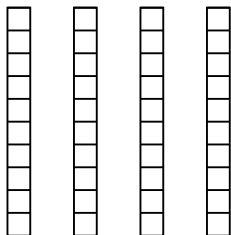
2) $4 \times 0.72 =$



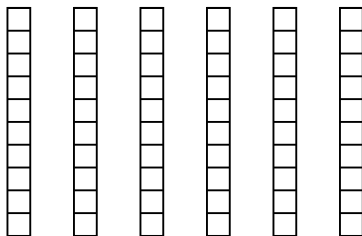
3) $9 \times 0.3 =$



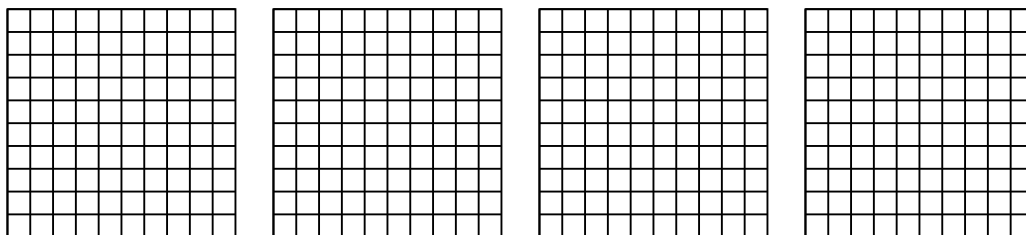
4) $4 \times 0.6 =$



5) $6 \times 0.4 =$



6) $4 \times 0.98 =$



Réponses

1. _____

2. _____

3. _____

4. _____

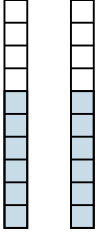
5. _____

6. _____

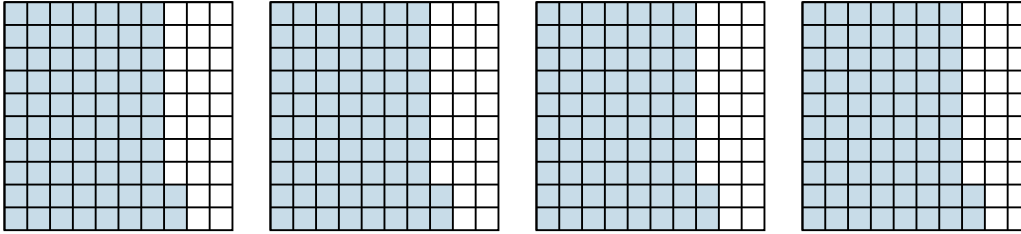


Utilisez la méthode visuelle pour résoudre chaque exercice.

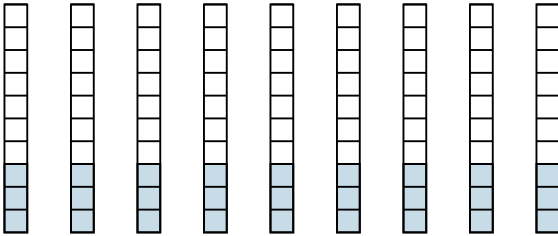
1) $2 \times 0.6 =$



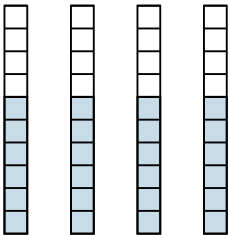
2) $4 \times 0.72 =$



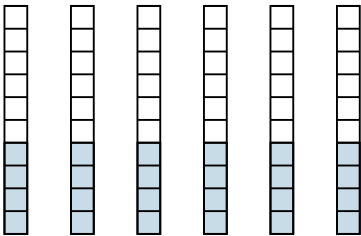
3) $9 \times 0.3 =$



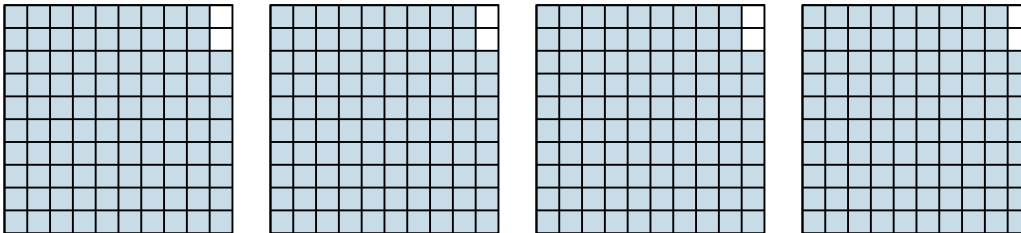
4) $4 \times 0.6 =$



5) $6 \times 0.4 =$



6) $4 \times 0.98 =$



Réponses

1. $\frac{12}{10} = 1.2$

2. $\frac{288}{100} = 2.88$

3. $\frac{27}{10} = 2.7$

4. $\frac{24}{10} = 2.4$

5. $\frac{24}{10} = 2.4$

6. $\frac{392}{100} = 3.92$