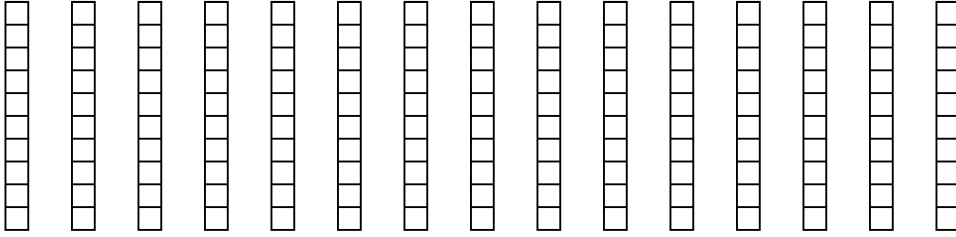


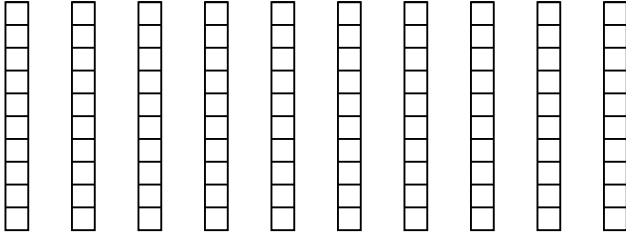


Utilisez la méthode visuelle pour résoudre chaque exercice.

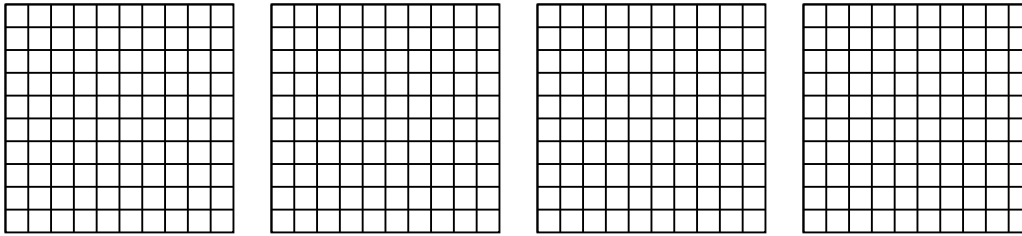
1) $15 \times 0,9 =$



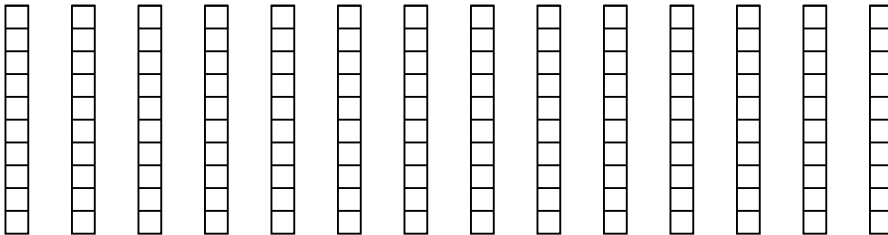
2) $10 \times 0,3 =$




3) $4 \times 0,49 =$



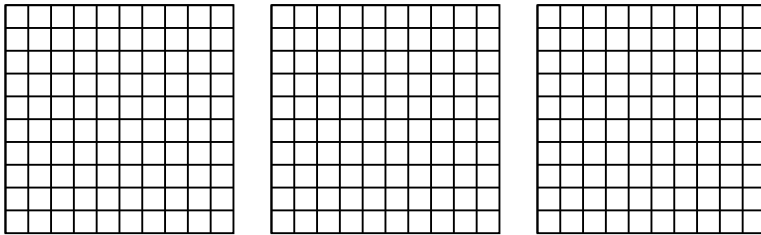
4) $14 \times 0,1 =$



5) $3 \times 0,53 =$



6) $3 \times 0,68 =$



Réponses

1. _____

2. _____

3. _____

4. _____

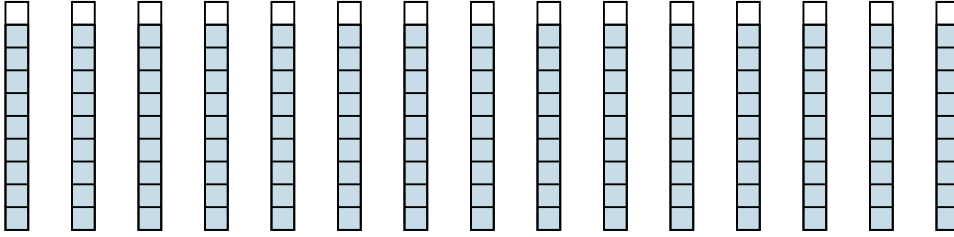
5. _____

6. _____

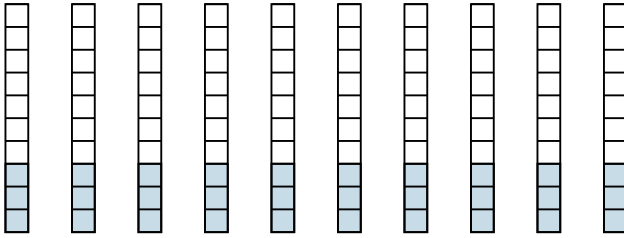


Utilisez la méthode visuelle pour résoudre chaque exercice.

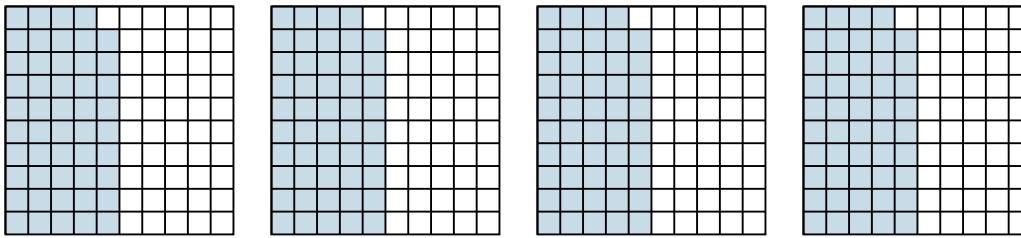
1) $15 \times 0,9 =$



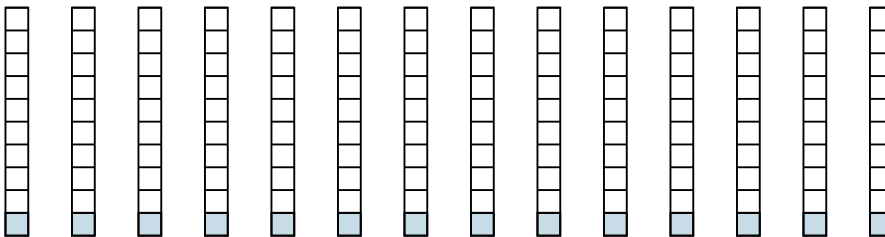
2) $10 \times 0,3 =$



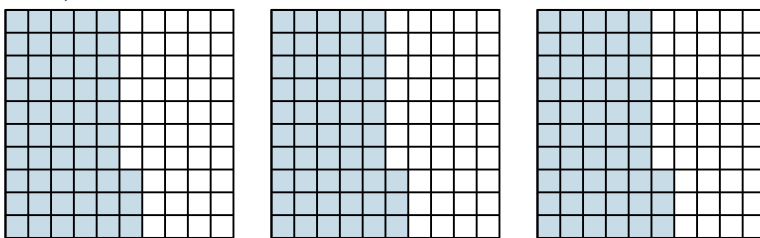
3) $4 \times 0,49 =$



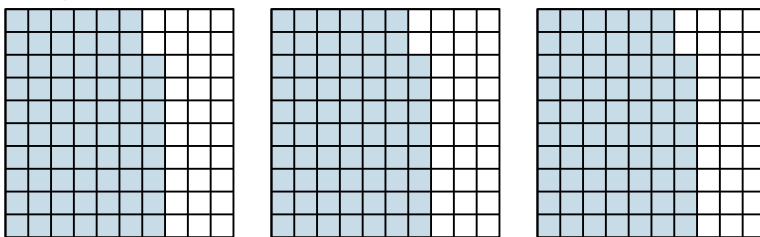
4) $14 \times 0,1 =$



5) $3 \times 0,53 =$



6) $3 \times 0,68 =$



Réponses

1. $\frac{135}{10} = 13,5$

2. $\frac{30}{10} = 3$

3. $\frac{196}{100} = 1,96$

4. $\frac{14}{10} = 1,4$

5. $\frac{159}{100} = 1,59$

6. $\frac{204}{100} = 2,04$