


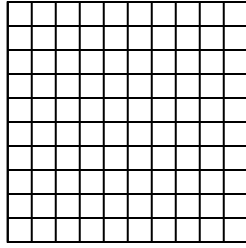


Utilisez la méthode visuelle pour résoudre chaque exercice.


1) $0,1 \times 0,1 =$




2) $0,2 \times 0,2 =$




3) $0,6 \times 0,5 =$




4) $0,1 \times 0,9 =$




5) $0,5 \times 0,6 =$




6) $0,1 \times 0,7 =$




7) $0,1 \times 0,5 =$




8) $0,4 \times 0,6 =$




9) $0,4 \times 0,2 =$




10) $0,6 \times 0,3 =$




11) $0,7 \times 0,9 =$




12) $0,1 \times 0,8 =$




13) $0,3 \times 0,7 =$



14) $0,4 \times 0,6 =$



15) $0,9 \times 0,1 =$



Réponses

1. _____

2. _____

3. _____

4. _____

5. _____

6. _____

7. _____

8. _____

9. _____

10. _____

11. _____

12. _____

13. _____

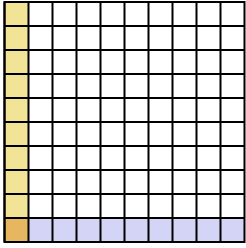
14. _____

15. _____

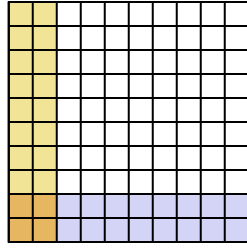


Utilisez la méthode visuelle pour résoudre chaque exercice.

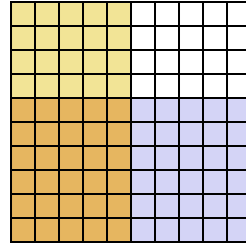
1) $0,1 \times 0,1 =$



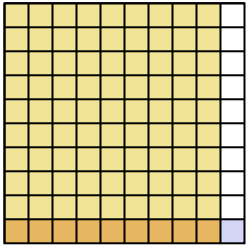
2) $0,2 \times 0,2 =$



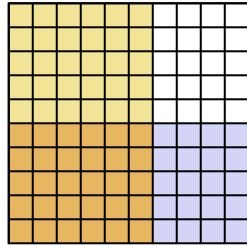
3) $0,6 \times 0,5 =$



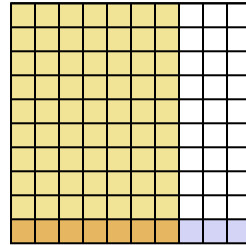
4) $0,1 \times 0,9 =$



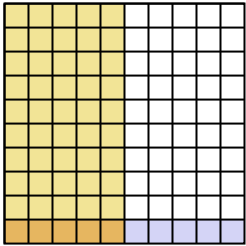
5) $0,5 \times 0,6 =$



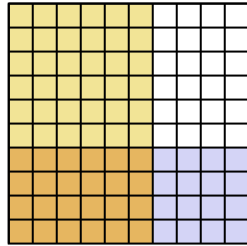
6) $0,1 \times 0,7 =$



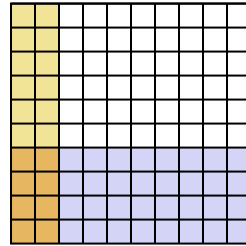
7) $0,1 \times 0,5 =$



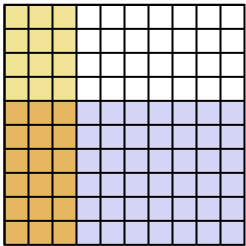
8) $0,4 \times 0,6 =$



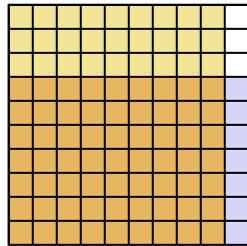
9) $0,4 \times 0,2 =$



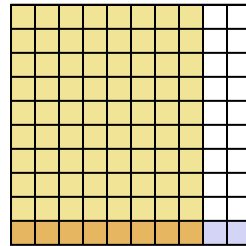
10) $0,6 \times 0,3 =$



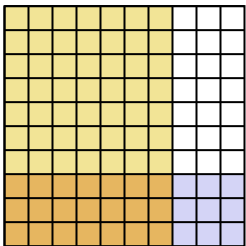
11) $0,7 \times 0,9 =$



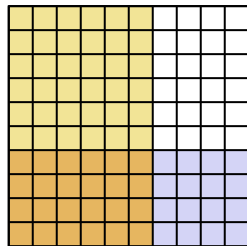
12) $0,1 \times 0,8 =$



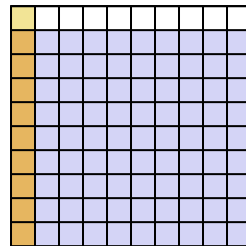
13) $0,3 \times 0,7 =$



14) $0,4 \times 0,6 =$



15) $0,9 \times 0,1 =$



Réponses

1. $\frac{1}{100} = 0,01$

2. $\frac{4}{100} = 0,04$

3. $\frac{30}{100} = 0,3$

4. $\frac{9}{100} = 0,09$

5. $\frac{30}{100} = 0,3$

6. $\frac{7}{100} = 0,07$

7. $\frac{5}{100} = 0,05$

8. $\frac{24}{100} = 0,24$

9. $\frac{8}{100} = 0,08$

10. $\frac{18}{100} = 0,18$

11. $\frac{63}{100} = 0,63$

12. $\frac{8}{100} = 0,08$

13. $\frac{21}{100} = 0,21$

14. $\frac{24}{100} = 0,24$

15. $\frac{9}{100} = 0,09$