


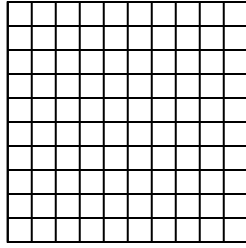


Utilisez la méthode visuelle pour résoudre chaque exercice.


1) $0,9 \times 0,8 =$




2) $0,3 \times 0,8 =$




3) $0,6 \times 0,9 =$




4) $0,8 \times 0,3 =$




5) $0,7 \times 0,8 =$




6) $0,7 \times 0,1 =$




7) $0,7 \times 0,8 =$




8) $0,2 \times 0,2 =$




9) $0,8 \times 0,8 =$




10) $0,8 \times 0,3 =$




11) $0,2 \times 0,2 =$




12) $0,8 \times 0,5 =$




13) $0,1 \times 0,7 =$



14) $0,2 \times 0,3 =$



15) $0,6 \times 0,7 =$



Réponses

1. _____

2. _____

3. _____

4. _____

5. _____

6. _____

7. _____

8. _____

9. _____

10. _____

11. _____

12. _____

13. _____

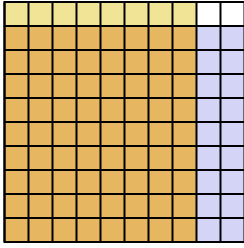
14. _____

15. _____

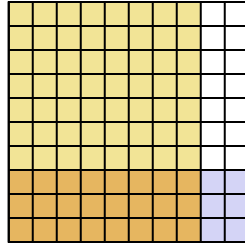


Utilisez la méthode visuelle pour résoudre chaque exercice.

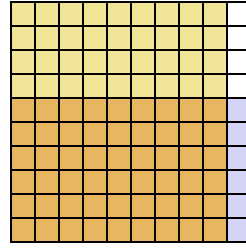
1) $0,9 \times 0,8 =$



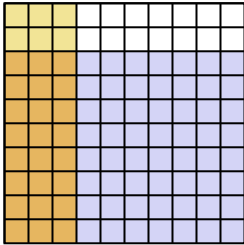
2) $0,3 \times 0,8 =$



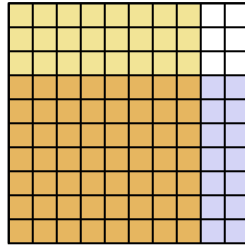
3) $0,6 \times 0,9 =$



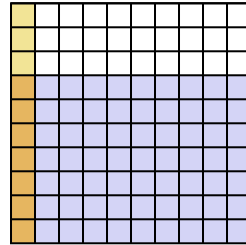
4) $0,8 \times 0,3 =$



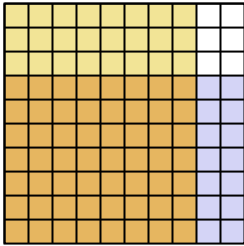
5) $0,7 \times 0,8 =$



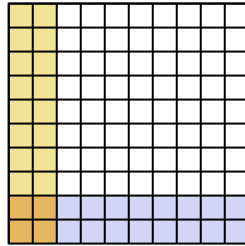
6) $0,7 \times 0,1 =$



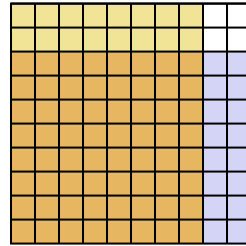
7) $0,7 \times 0,8 =$



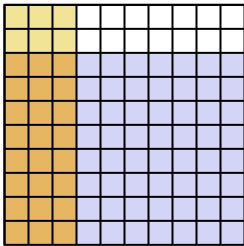
8) $0,2 \times 0,2 =$



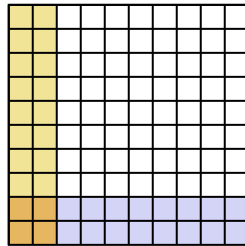
9) $0,8 \times 0,8 =$



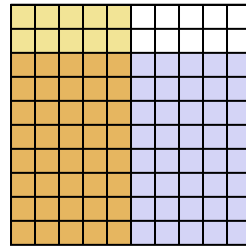
10) $0,8 \times 0,3 =$



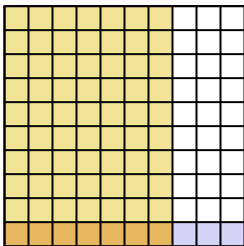
11) $0,2 \times 0,2 =$



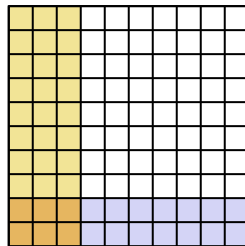
12) $0,8 \times 0,5 =$



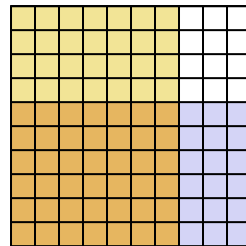
13) $0,1 \times 0,7 =$



14) $0,2 \times 0,3 =$



15) $0,6 \times 0,7 =$



Réponses

1. $\frac{72}{100} = 0,72$

2. $\frac{24}{100} = 0,24$

3. $\frac{54}{100} = 0,54$

4. $\frac{24}{100} = 0,24$

5. $\frac{56}{100} = 0,56$

6. $\frac{7}{100} = 0,07$

7. $\frac{56}{100} = 0,56$

8. $\frac{4}{100} = 0,04$

9. $\frac{64}{100} = 0,64$

10. $\frac{24}{100} = 0,24$

11. $\frac{4}{100} = 0,04$

12. $\frac{40}{100} = 0,4$

13. $\frac{7}{100} = 0,07$

14. $\frac{6}{100} = 0,06$

15. $\frac{42}{100} = 0,42$