


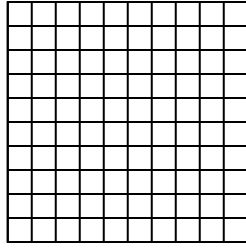


Utilisez la méthode visuelle pour résoudre chaque exercice.


1) $0,1 \times 0,5 =$




2) $0,4 \times 0,4 =$




3) $0,4 \times 0,1 =$




4) $0,2 \times 0,7 =$




5) $0,2 \times 0,3 =$




6) $0,2 \times 0,5 =$




7) $0,9 \times 0,7 =$




8) $0,8 \times 0,5 =$




9) $0,6 \times 0,3 =$




10) $0,6 \times 0,5 =$




11) $0,7 \times 0,1 =$




12) $0,8 \times 0,6 =$




13) $0,3 \times 0,9 =$



14) $0,3 \times 0,4 =$



15) $0,6 \times 0,5 =$



Réponses

1. _____

2. _____

3. _____

4. _____

5. _____

6. _____

7. _____

8. _____

9. _____

10. _____

11. _____

12. _____

13. _____

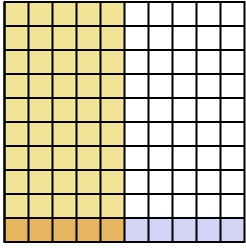
14. _____

15. _____

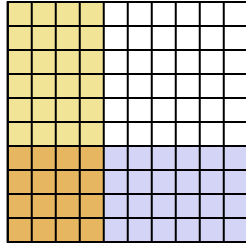


Utilisez la méthode visuelle pour résoudre chaque exercice.

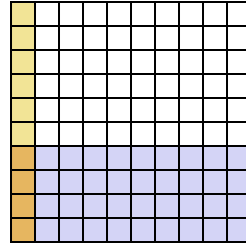
1) $0,1 \times 0,5 =$



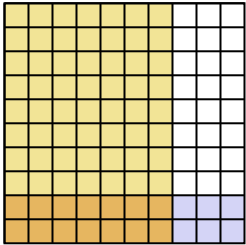
2) $0,4 \times 0,4 =$



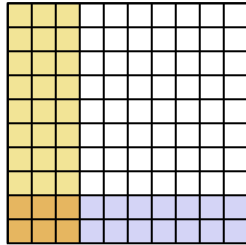
3) $0,4 \times 0,1 =$



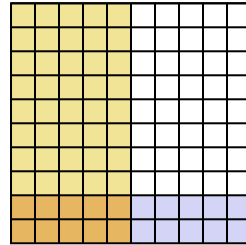
4) $0,2 \times 0,7 =$



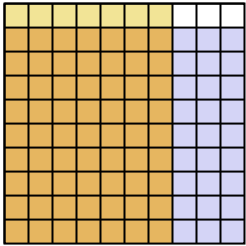
5) $0,2 \times 0,3 =$



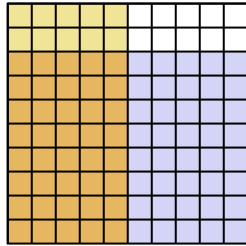
6) $0,2 \times 0,5 =$



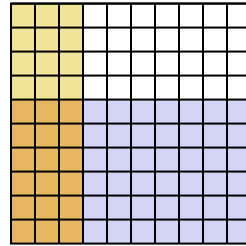
7) $0,9 \times 0,7 =$



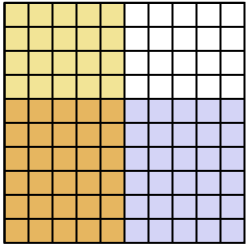
8) $0,8 \times 0,5 =$



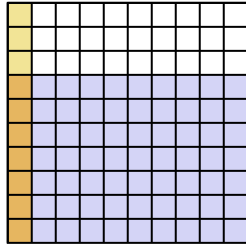
9) $0,6 \times 0,3 =$



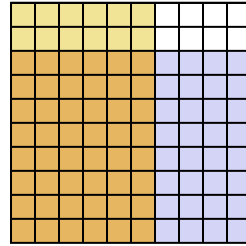
10) $0,6 \times 0,5 =$



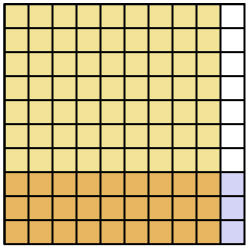
11) $0,7 \times 0,1 =$



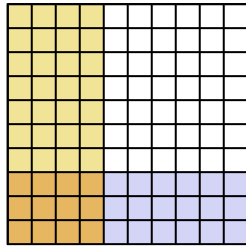
12) $0,8 \times 0,6 =$



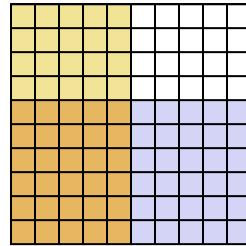
13) $0,3 \times 0,9 =$



14) $0,3 \times 0,4 =$



15) $0,6 \times 0,5 =$



Réponses

1. $\frac{5}{100} = 0,05$

2. $\frac{16}{100} = 0,16$

3. $\frac{4}{100} = 0,04$

4. $\frac{14}{100} = 0,14$

5. $\frac{6}{100} = 0,06$

6. $\frac{10}{100} = 0,1$

7. $\frac{63}{100} = 0,63$

8. $\frac{40}{100} = 0,4$

9. $\frac{18}{100} = 0,18$

10. $\frac{30}{100} = 0,3$

11. $\frac{7}{100} = 0,07$

12. $\frac{48}{100} = 0,48$

13. $\frac{27}{100} = 0,27$

14. $\frac{12}{100} = 0,12$

15. $\frac{30}{100} = 0,3$