


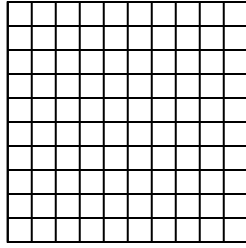


Utilisez la méthode visuelle pour résoudre chaque exercice.

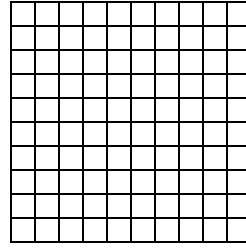
1) $0,2 \times 0,4 =$




2) $0,7 \times 0,8 =$




3) $0,6 \times 0,9 =$



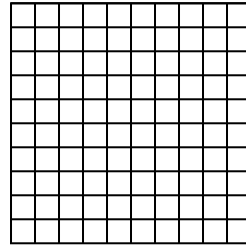
4) $0,2 \times 0,3 =$




5) $0,3 \times 0,7 =$




6) $0,6 \times 0,8 =$



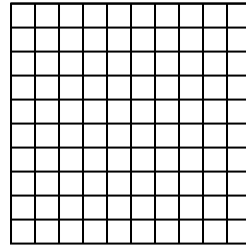
7) $0,5 \times 0,9 =$




8) $0,9 \times 0,4 =$




9) $0,9 \times 0,1 =$




10) $0,7 \times 0,3 =$




11) $0,8 \times 0,3 =$




12) $0,8 \times 0,4 =$




13) $0,9 \times 0,2 =$



14) $0,7 \times 0,1 =$



15) $0,4 \times 0,8 =$



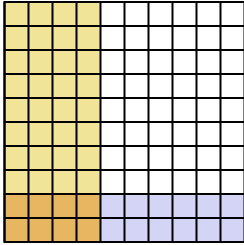
Réponses

1. _____
2. _____
3. _____
4. _____
5. _____
6. _____
7. _____
8. _____
9. _____
10. _____
11. _____
12. _____
13. _____
14. _____
15. _____

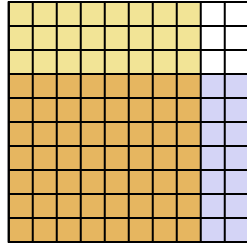


Utilisez la méthode visuelle pour résoudre chaque exercice.

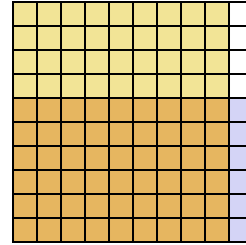
1) $0,2 \times 0,4 =$



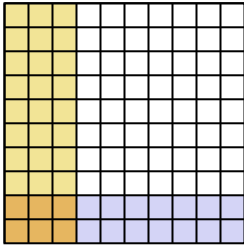
2) $0,7 \times 0,8 =$



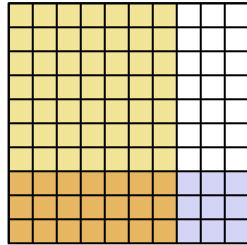
3) $0,6 \times 0,9 =$



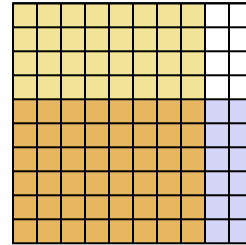
4) $0,2 \times 0,3 =$



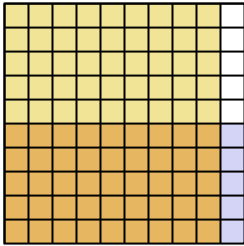
5) $0,3 \times 0,7 =$



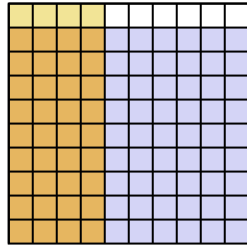
6) $0,6 \times 0,8 =$



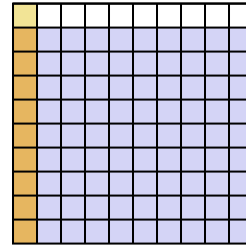
7) $0,5 \times 0,9 =$



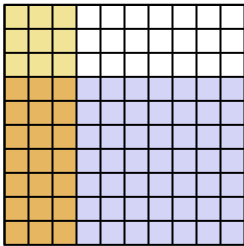
8) $0,9 \times 0,4 =$



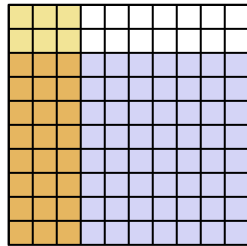
9) $0,9 \times 0,1 =$



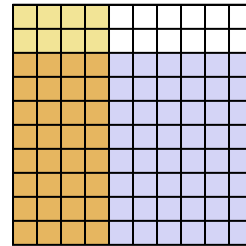
10) $0,7 \times 0,3 =$



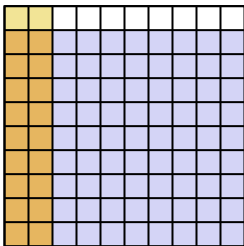
11) $0,8 \times 0,3 =$



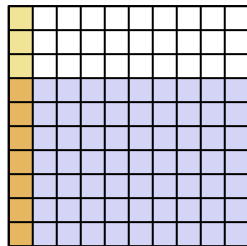
12) $0,8 \times 0,4 =$



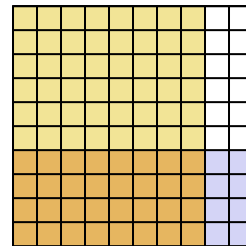
13) $0,9 \times 0,2 =$



14) $0,7 \times 0,1 =$



15) $0,4 \times 0,8 =$



Réponses

1. $\frac{8}{100} = 0,08$

2. $\frac{56}{100} = 0,56$

3. $\frac{54}{100} = 0,54$

4. $\frac{6}{100} = 0,06$

5. $\frac{21}{100} = 0,21$

6. $\frac{48}{100} = 0,48$

7. $\frac{45}{100} = 0,45$

8. $\frac{36}{100} = 0,36$

9. $\frac{9}{100} = 0,09$

10. $\frac{21}{100} = 0,21$

11. $\frac{24}{100} = 0,24$

12. $\frac{32}{100} = 0,32$

13. $\frac{18}{100} = 0,18$

14. $\frac{7}{100} = 0,07$

15. $\frac{32}{100} = 0,32$