




Comptez la quantité de chaque objet présent.

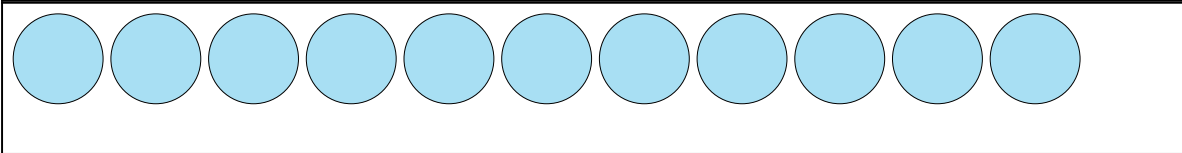
**Réponses**

1)




1. \_\_\_\_\_

2)



2. \_\_\_\_\_


3)



3. \_\_\_\_\_

4. \_\_\_\_\_

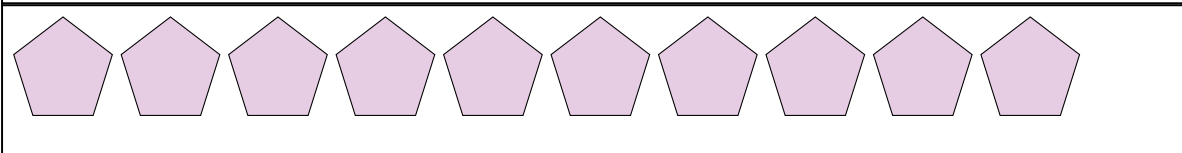
4)



5. \_\_\_\_\_

6. \_\_\_\_\_

5)



7. \_\_\_\_\_

8. \_\_\_\_\_

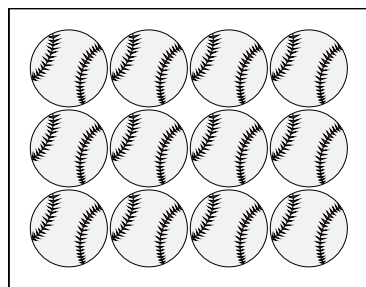
6)




9. \_\_\_\_\_

10. \_\_\_\_\_


7)




8)



9)



10)



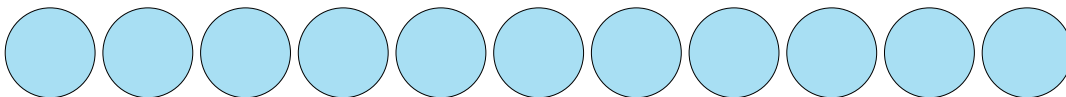


Comptez la quantité de chaque objet présent.

1)



2)



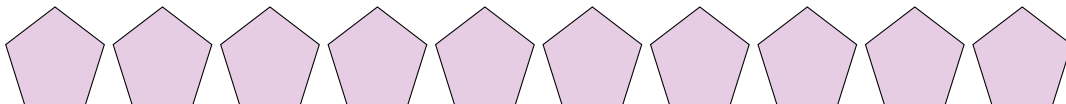
3)



4)



5)



6)



**Réponses**

1. 6

2. 11

3. 10

4. 20

5. 10

6. 19

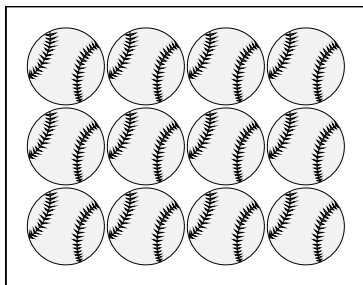
7. 12

8. 8


9. 8

10. 6


7)



8)



9)



10)

