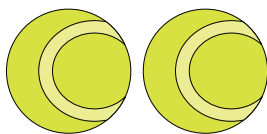




Comptez la quantité de chaque objet présent.

Réponses

1)



1. _____

2)



2. _____

3)



3. _____

4. _____

4)



5. _____

6. _____

5)



7. _____

8. _____

6)



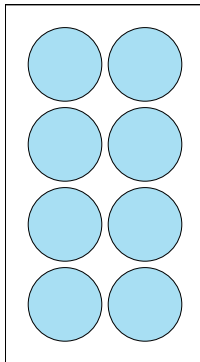
9. _____

10. _____


7)



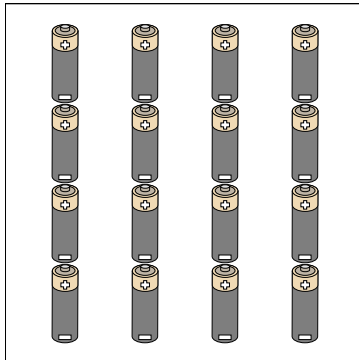
8)



9)



10)

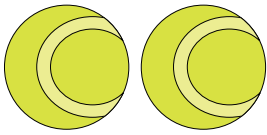




Comptez la quantité de chaque objet présent.

Réponses

1)



1. 2

2)



2. 3


3)



3. 19

4. 14

4)



5. 9

6. 17

5)



7. 20

8. 8

6)



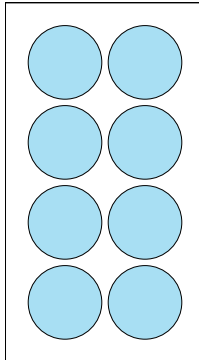
9. 6

10. 16


7)



8)



9)



10)

