



Comptez la quantité de chaque objet présent.

Réponses

1)



1. _____

2)



2. _____

3)



3. _____

4. _____


4)



5. _____

6. _____

5)



7. _____

8. _____


6)




9. _____

10. _____

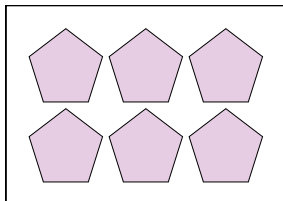
7)



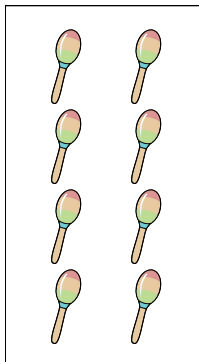
8)



9)




10)








Comptez la quantité de chaque objet présent.


Réponses


1) 

2) 


3) 


4) 

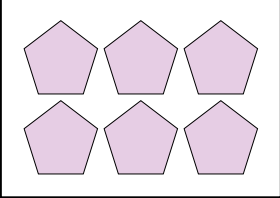
5) 

6) 

- 1. 9
- 2. 3
- 3. 9
- 4. 5
- 5. 2
- 6. 16
- 7. 6
- 8. 8
- 9. 6
- 10. 8

7) 

8) 

9) 

10) 