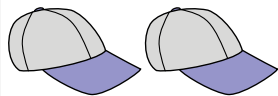




Comptez la quantité de chaque objet présent.

Réponses

1)



1. _____

2)



2. _____

3)



3. _____

4)



4. _____

5)



5. _____

6)



6. _____


7. _____

8. _____

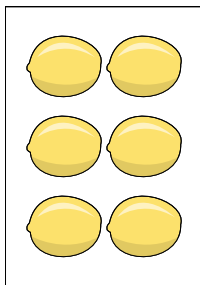
9. _____

10. _____


7)




8)



9)



10)

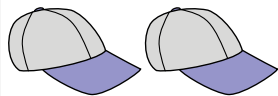




Comptez la quantité de chaque objet présent.

Réponses

1)



1. 2

2)



2. 16

3)



3. 18

4. 14

4)



5. 11

6. 13

5)



7. 8

8. 6


6)



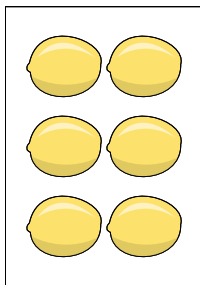
9. 4

10. 12


7)



8)



9)



10)

