



Comptez la quantité de chaque objet présent.

1)



2)



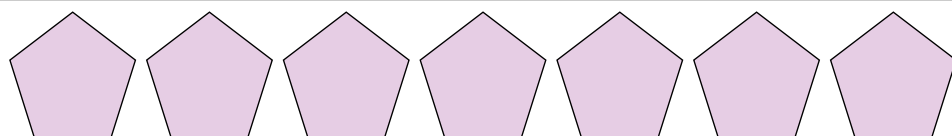
3)



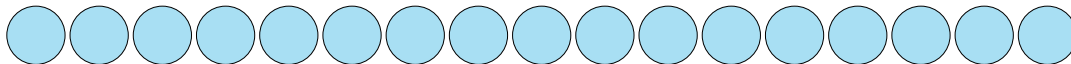
4)



5)



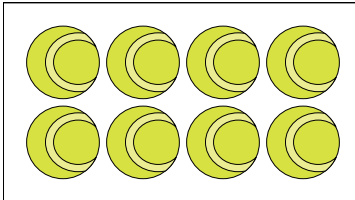
6)



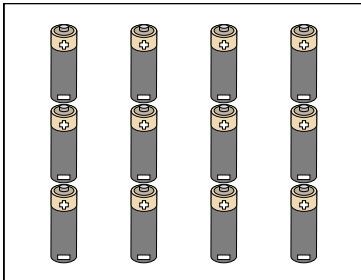
7)




8)



9)



10)



**Réponses**

1. \_\_\_\_\_

2. \_\_\_\_\_

3. \_\_\_\_\_

4. \_\_\_\_\_

5. \_\_\_\_\_

6. \_\_\_\_\_

7. \_\_\_\_\_

8. \_\_\_\_\_

9. \_\_\_\_\_

10. \_\_\_\_\_



Comptez la quantité de chaque objet présent.

1)



2)



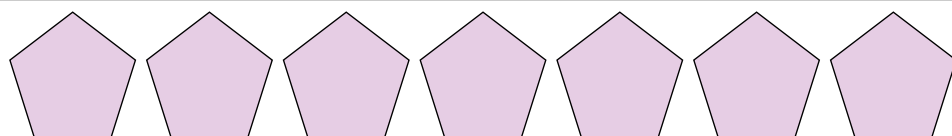
3)



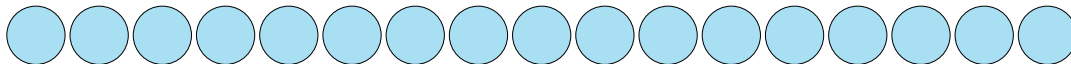
4)



5)



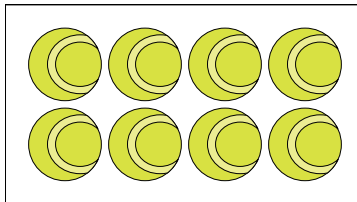
6)



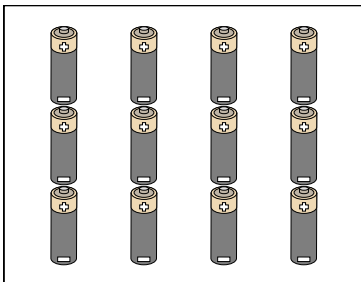
7)




8)



9)



10)



**Réponses**

1. 7

2. 17

3. 16

4. 15

5. 7

6. 17

7. 6

8. 8

9. 12

10. 4