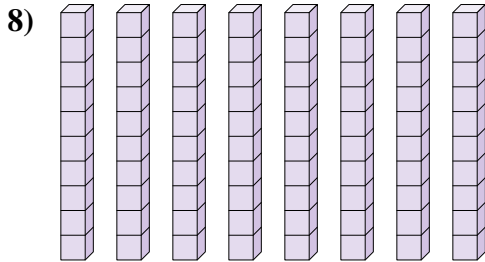

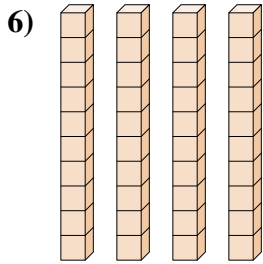
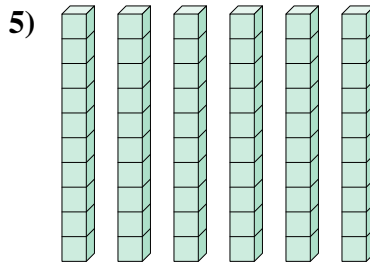
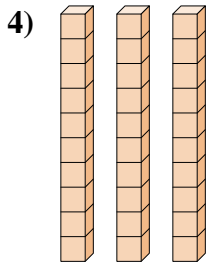

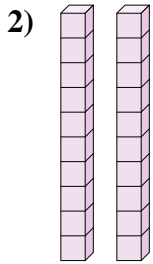
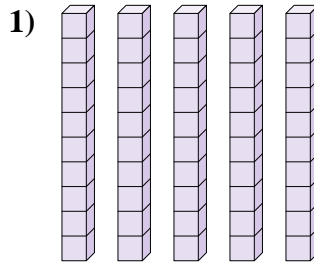
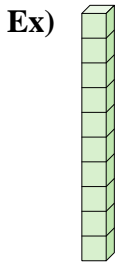




Déterminez la quantité de groupe de dizaines. Et trouvez le nombre total de briques.



**Réponses**

Ex.   1    10 

1. \_\_\_\_\_

2. \_\_\_\_\_

3. \_\_\_\_\_

4. \_\_\_\_\_

5. \_\_\_\_\_

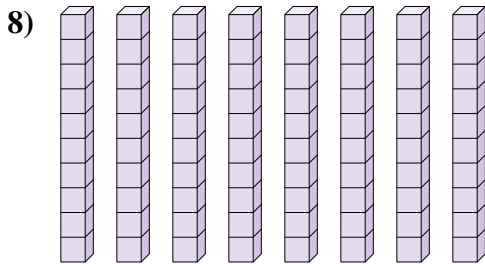

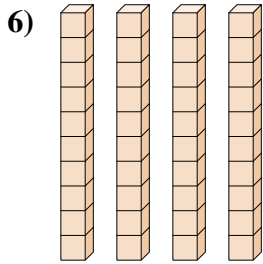
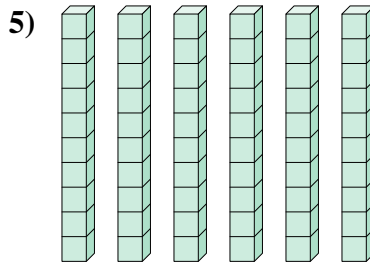
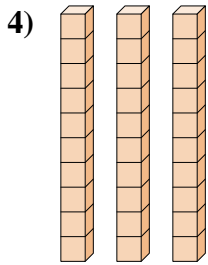

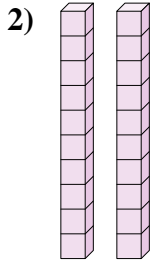
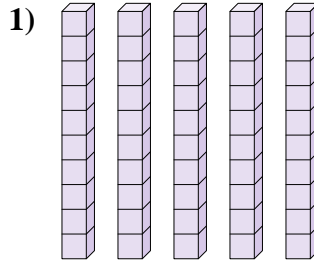
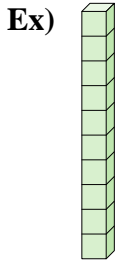
6. \_\_\_\_\_

7. \_\_\_\_\_

8. \_\_\_\_\_



Déterminez la quantité de groupe de dizaines. Et trouvez le nombre total de briques.



**Réponses**

Ex.	<u>1</u>	<u>10</u>
1.	<u>5</u>	<u>50</u>
2.	<u>2</u>	<u>20</u>
3.	<u>7</u>	<u>70</u>
4.	<u>3</u>	<u>30</u>
5.	<u>6</u>	<u>60</u>
6.	<u>4</u>	<u>40</u>
7.	<u>9</u>	<u>90</u>
8.	<u>8</u>	<u>80</u>