


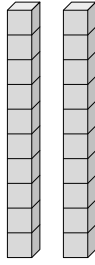


Déterminez la quantité de groupe de dizaines. Et trouvez le nombre total de briques.

Ex)



1)



**Réponses**

Ex.   1    10 

1. \_\_\_\_\_

2. \_\_\_\_\_

3. \_\_\_\_\_

4. \_\_\_\_\_

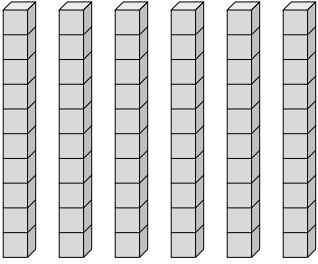
5. \_\_\_\_\_

6. \_\_\_\_\_

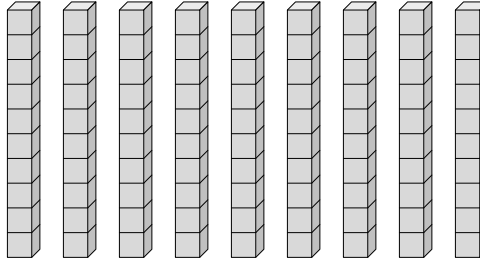
7. \_\_\_\_\_

8. \_\_\_\_\_

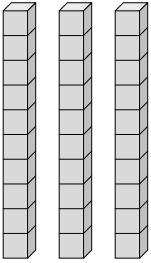
2)



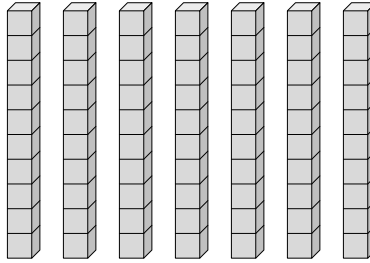
3)



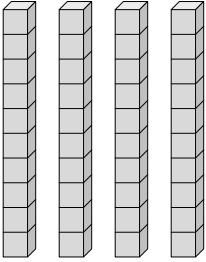
4)



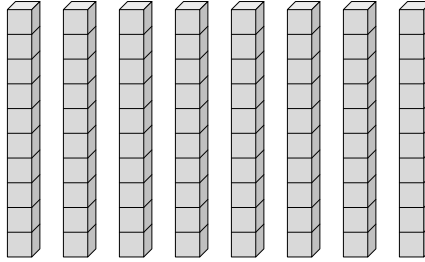
5)



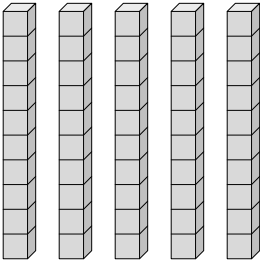
6)



7)




8)



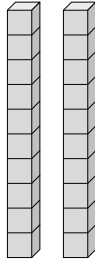


Déterminez la quantité de groupe de dizaines. Et trouvez le nombre total de briques.

Ex)



1)



**Réponses**

Ex. 1    10

1. 2    20

2. 6    60

3. 9    90

4. 3    30

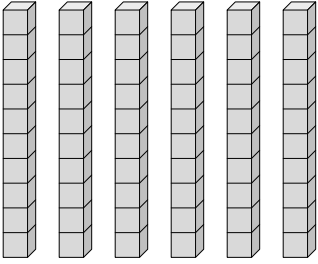
5. 7    70

6. 4    40

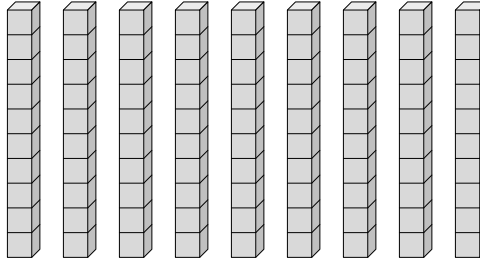
7. 8    80

8. 5    50

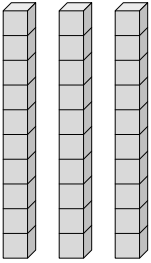
2)



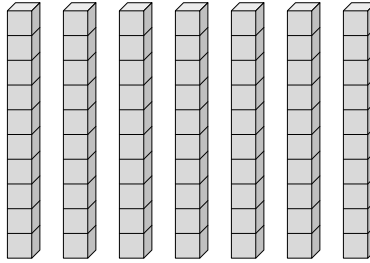
3)



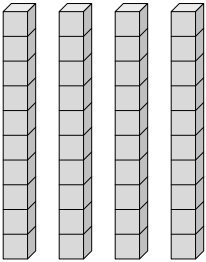
4)



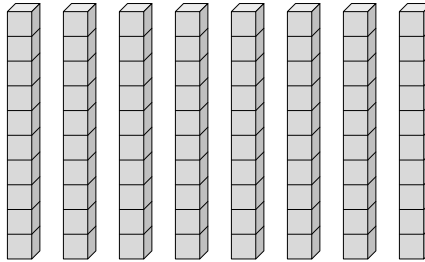
5)



6)



7)



8)

