


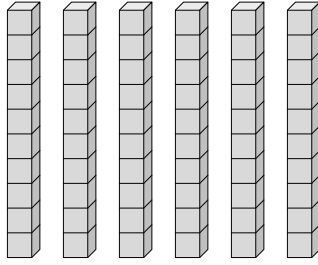


Déterminez la quantité de groupe de dizaines. Et trouvez le nombre total de briques.

Ex)



1)



Réponses

Ex. 1 10

1. _____

2. _____

3. _____

4. _____

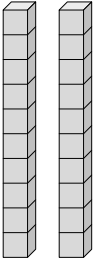
5. _____

6. _____

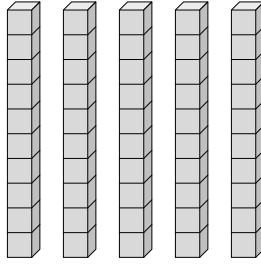
7. _____

8. _____

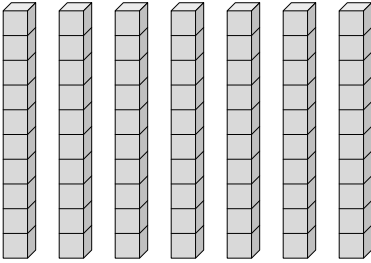
2)



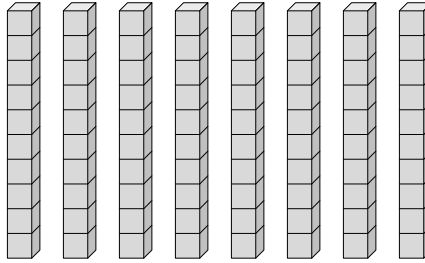
3)



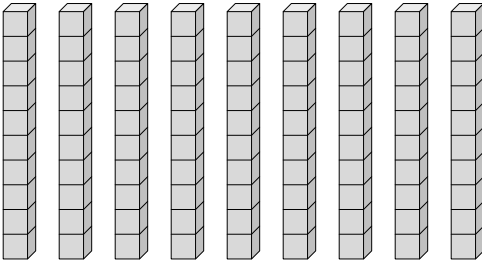
4)



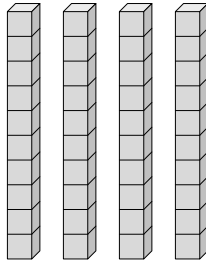
5)



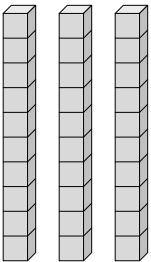
6)



7)




8)



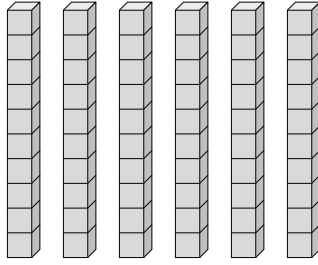


Déterminez la quantité de groupe de dizaines. Et trouvez le nombre total de briques.

Ex)



1)



Réponses

Ex. 1 10

1. 6 60

2. 2 20

3. 5 50

4. 7 70

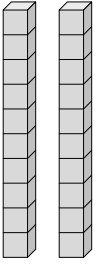
5. 8 80

6. 9 90

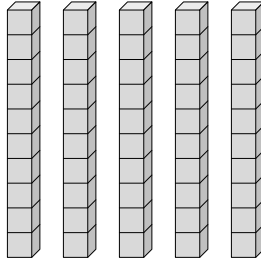
7. 4 40

8. 3 30

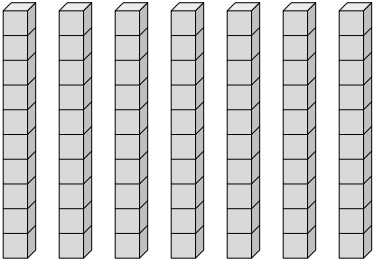
2)



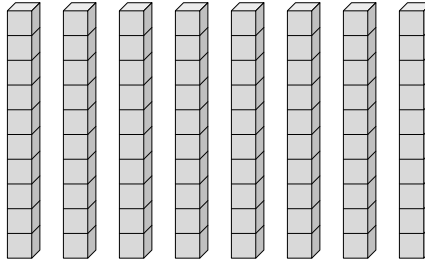
3)



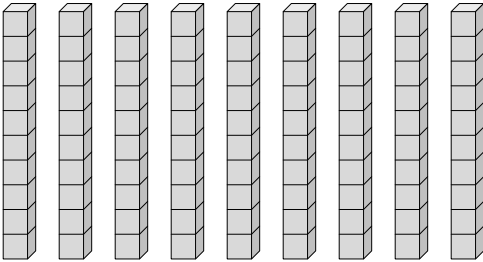
4)



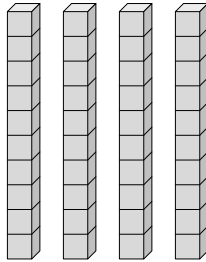
5)



6)



7)



8)

