


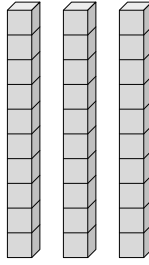


Déterminez la quantité de groupe de dizaines. Et trouvez le nombre total de briques.

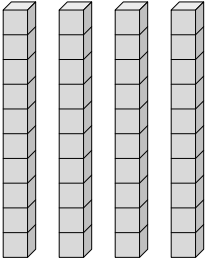
Ex)



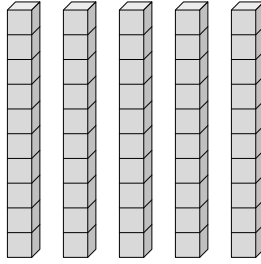
1)



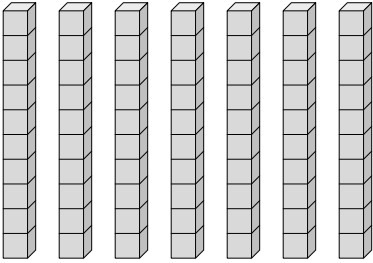
2)



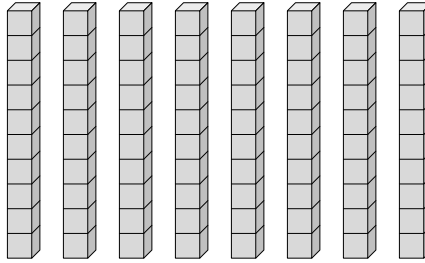
3)



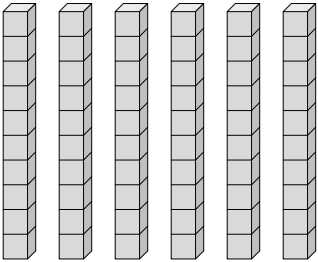
4)



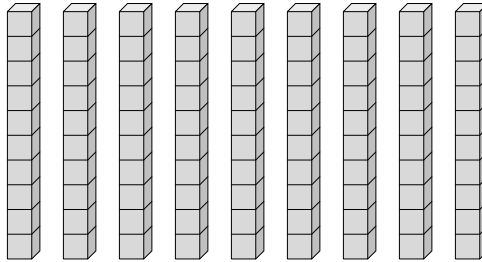
5)



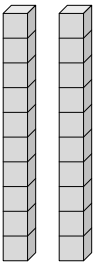
6)



7)



8)



Réponses

Ex. 1 10

1. _____

2. _____

3. _____

4. _____

5. _____

6. _____


7. _____

8. _____

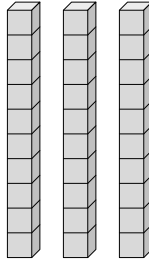


Déterminez la quantité de groupe de dizaines. Et trouvez le nombre total de briques.

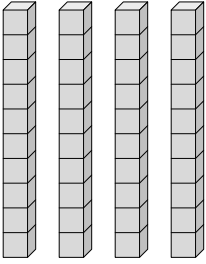
Ex)



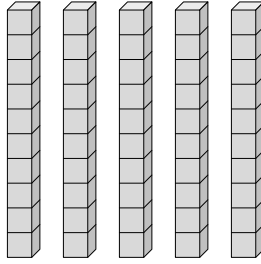
1)



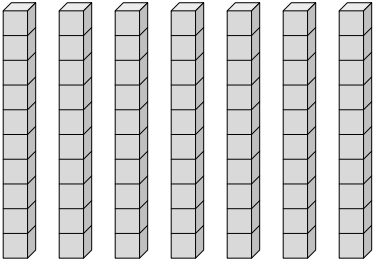
2)



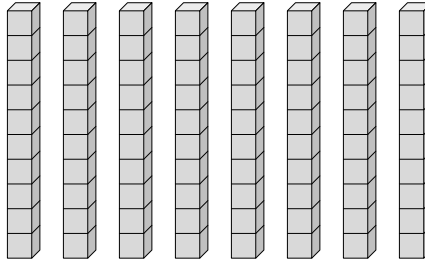
3)



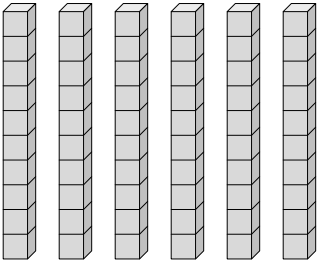
4)



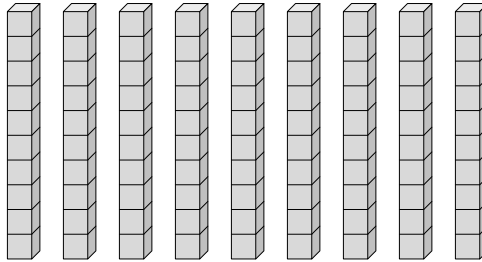
5)



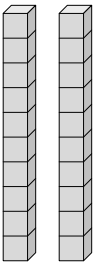
6)



7)



8)



Réponses

Ex. 1 10

1. 3 30

2. 4 40

3. 5 50

4. 7 70

5. 8 80

6. 6 60

7. 9 90

8. 2 20