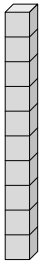


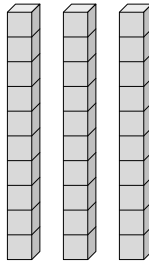


Déterminez la quantité de groupe de dizaines. Et trouvez le nombre total de briques.

Ex)



1)



Réponses

Ex. 1 10

1. _____

2. _____

3. _____

4. _____

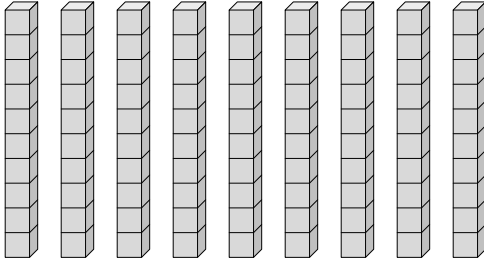
5. _____

6. _____

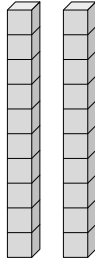
7. _____

8. _____

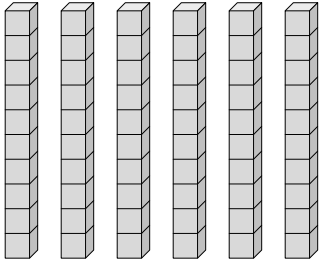
2)



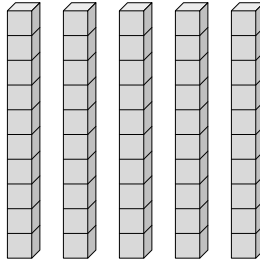
3)



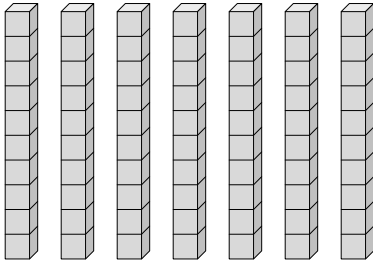
4)



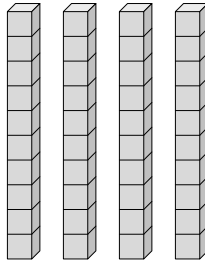
5)



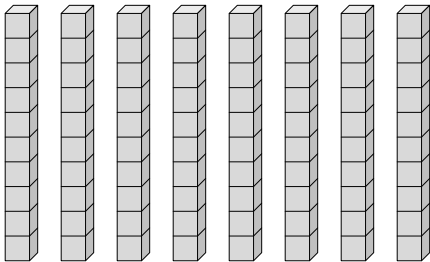
6)



7)




8)



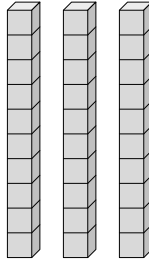


Déterminez la quantité de groupe de dizaines. Et trouvez le nombre total de briques.

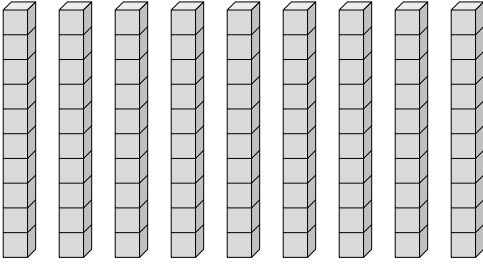
Ex)



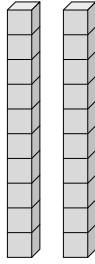
1)



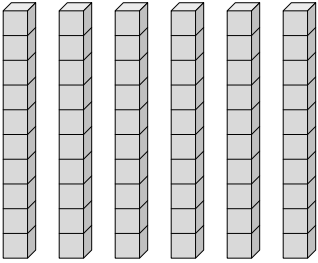
2)



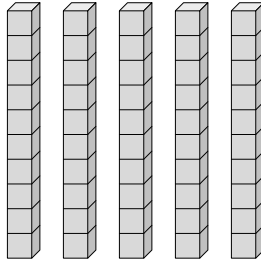
3)



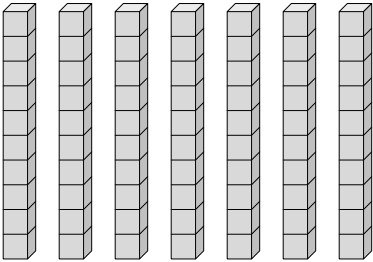
4)



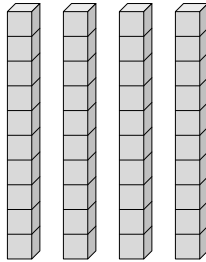
5)



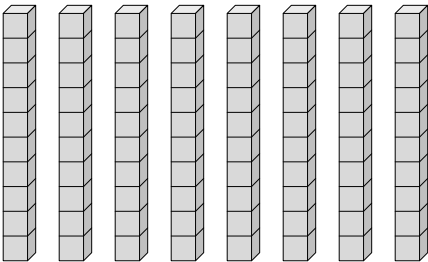
6)



7)



8)



Réponses

Ex. 1 10

1. 3 30

2. 9 90

3. 2 20

4. 6 60

5. 5 50

6. 7 70

7. 4 40

8. 8 80